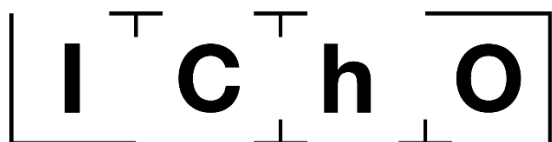


THEORETICAL EXAM




**51st — International
Chemistry Olympiad
France — Paris — 2019**

Making science together!

2019-07-26



| | | |
|-------------------------------------------------------------------------------------|---------------------------------------------------------------|------------------------------------------------------------------------------------|
|  | MINISTÈRE DE L'ÉDUCATION NATIONALE ET DE LA JEUNESSE | MINISTÈRE DE L'ENSEIGNEMENT SUPÉRIEUR, DE LA RECHERCHE ET DE L'INNOVATION |
|-------------------------------------------------------------------------------------|---------------------------------------------------------------|------------------------------------------------------------------------------------|

General instructions

- This theoretical exam booklet contains **60** pages.
- You may begin writing as soon as the Start command is given.
- You have 5 hours to complete the exam.
- All **results and answers (including graphs)** must be clearly written in **pen** in their respective designed areas on the exam papers. Answers written outside the answer boxes will not be graded.
- If you need scratch paper, use the backside of the exam sheets. Remember that nothing outside the designed areas will be graded.
- Use only the pen and calculator provided.
- The official English version of the exam booklet is available upon request and serves for clarification only.
- If you need to leave the exam room (to use the toilet or have a snack), wave the corresponding IChO card. An exam supervisor will come to accompany you.
- For multiple-choice questions: if you want to change your answer, fill the answer box completely and then make a new empty answer box next to it.
- The supervisor will announce a 30-minute warning before the Stop command.
- You must stop your work immediately when the Stop command is announced. Failure to stop writing by $\frac{1}{2}$ minute or longer will lead to nullification of your theoretical exam.
- After the Stop command has been given, place your exam booklet back in your exam envelope, then wait at your seat. The exam supervisor will come to seal the envelope in front of you and collect it.

GOOD LUCK!

Table of Contents

This theoretical exam is composed of 9 independent problems, as follows. Their relative weights are indicated in parenthesis.

| | | |
|----------------------------------------------------------|------|-------|
| Problem T1: Infinite well and butadiene | (6%) | p. 8 |
| Problem T2: Hydrogen production by water-splitting | (7%) | p. 13 |
| Problem T3: About silver chloride | (5%) | p. 19 |
| Problem T4: From black powder to the discovery of iodine | (7%) | p. 24 |
| Problem T5: Complexes for the formation of nanomachines | (8%) | p. 31 |
| Problem T6: Characterization of a block-copolymer | (8%) | p. 39 |
| Problem T7: Ring motion in a [2]catenane | (6%) | p. 47 |
| Problem T8: Identification and synthesis of inositols | (6%) | p. 52 |
| Problem T9: Synthesis of levobupivacaine | (7%) | p. 57 |

Physical constants and equations

In these tasks, we assume the activities of all aqueous species to be well approximated by their respective concentration in mol L^{-1} . To further simplify formulas and expressions, the standard concentration $c^\circ = 1 \text{ mol L}^{-1}$ is omitted.

Avogadro's constant:

$$N_A = 6.022 \times 10^{23} \text{ mol}^{-1}$$

Universal gas constant:

$$R = 8.314 \text{ J mol}^{-1} \text{ K}^{-1}$$

Standard pressure:

$$p^\circ = 1 \text{ bar} = 10^5 \text{ Pa}$$

Atmospheric pressure:

$$P_{\text{atm}} = 1 \text{ atm} = 1.013 \text{ bar} = 1.013 \times 10^5 \text{ Pa}$$

Zero of the Celsius scale:

$$273.15 \text{ K}$$

Faraday constant:

$$F = 9.6485 \times 10^4 \text{ C mol}^{-1}$$

Watt:

$$1 \text{ W} = 1 \text{ J s}^{-1}$$

Kilowatt hour:

$$1 \text{ kWh} = 3.6 \times 10^6 \text{ J}$$

Planck constant:

$$h = 6.6261 \times 10^{-34} \text{ J s}$$

Speed of light in vacuum:

$$c = 2.998 \times 10^8 \text{ m s}^{-1}$$

Elementary charge:

$$e = 1.6022 \times 10^{-19} \text{ C}$$

Electron-volt

$$1 \text{ eV} = 1.6022 \times 10^{-19} \text{ J}$$

Electrical power:

$$P = \Delta E \times I$$

Power efficiency:

$$\eta = P_{\text{obtained}}/P_{\text{applied}}$$

Planck-Einstein relation:

$$E = hc/\lambda = h \nu$$

Ideal gas equation:

$$pV = nRT$$

Gibbs free energy:

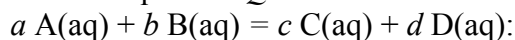
$$G = H - TS$$

$$\Delta_r G^\circ = -RT \ln K^\circ$$

$$\Delta_r G^\circ = -n F E_{\text{cell}}^\circ$$

$$\Delta_r G = \Delta_r G^\circ + RT \ln Q$$

Reaction quotient Q for a reaction



$$Q = \frac{[\text{C}]^c [\text{D}]^d}{[\text{A}]^a [\text{B}]^b}$$

Henderson–Hasselbalch equation:

$$\text{pH} = \text{p}K_a + \log \frac{[\text{A}^-]}{[\text{AH}]}$$

Nernst–Peterson equation:

$$E = E^\circ - \frac{RT}{zF} \ln Q$$

where Q is the reaction quotient
of the reduction half-reaction

$$\text{at } T = 298 \text{ K}, \frac{RT}{F} \ln 10 \approx 0.059 \text{ V}$$

Beer–Lambert law:

$$A = \epsilon l c$$

Rate laws in integrated form:

- Zero order:

$$[\text{A}] = [\text{A}]_0 - kt$$

- First order:

$$\ln[\text{A}] = \ln[\text{A}]_0 - kt$$

- Second order:

$$1/[\text{A}] = 1/[\text{A}]_0 + kt$$

Half-life for a first order process:

$$\frac{\ln 2}{k}$$

Number average molar mass M_n :

$$M_n = \frac{\sum_i N_i M_i}{\sum_i N_i}$$

Mass average molar mass M_w :


$$M_w = \frac{\sum_i N_i M_i^2}{\sum_i N_i M_i}$$

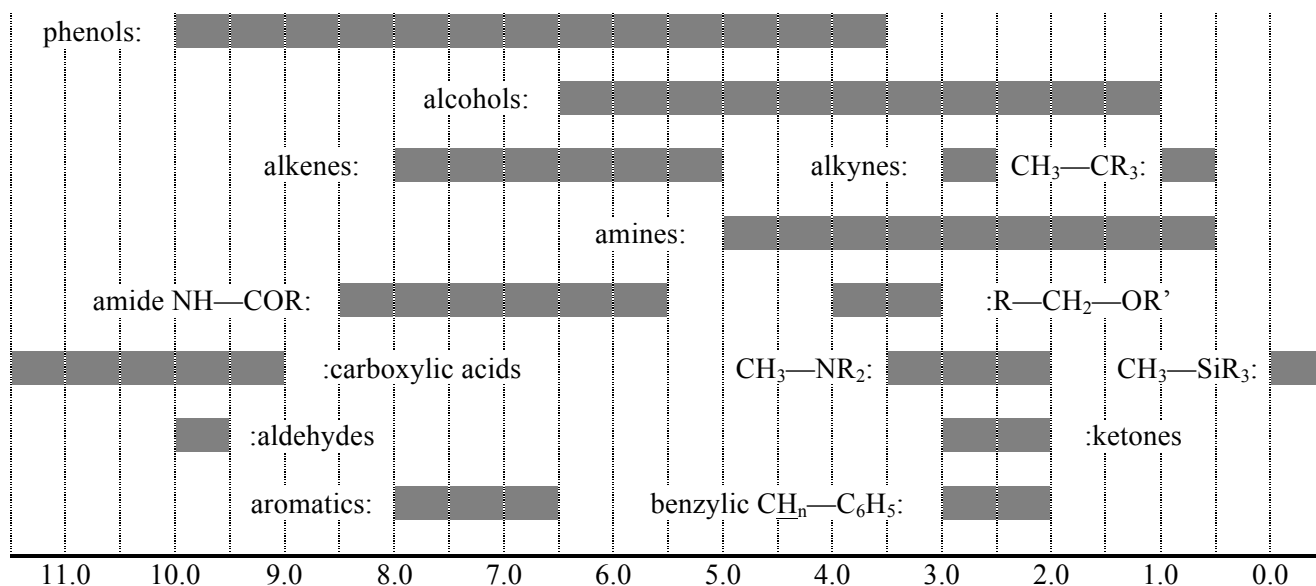
Polydispersity index I_p :

$$I_p = \frac{M_w}{M_n}$$

Periodic table

| | | | | | | | | | | | | | | | | | | | | | | | | | | | | | | | | | | | | | | |
|-------------------|--|-------------------|--|-------------------|-------------------|-------------------|-------------------|-------------------|-------------------|-------------------|-------------------|-------------------|-------------------|-------------------|-------------------|-------------------|-------------------|-------------------|-------------------|-------------------|-------------------|-------------------|-------------------|---------------|-------------------|-------------------|-------------------|---------------|-------------------|-------------------|-------------------|-------------------|-------------------|-------------------|-------------------|-------------------|-------------------|-------------------|
| 1 | | | | | | | | | | | | | | | | | 18 | | | | | | | | | | | | | | | | | | | | | |
| 1 H 1.008 | | 2 | | | | | | | | | | | | | | | 13 | | | | | | | | | | | | | | | 14 | 15 | 16 | 17 | 2 He 4.003 | | |
| 3 Li 6.94 | | 4 Be 9.01 | | | | | | | | | | | | | | | 5 B 10.81 | | 6 C 12.01 | 7 N 14.01 | 8 O 16.00 | 9 F 19.00 | 10 Ne 20.18 | | | | | | | | | | | | | | | |
| 11 Na 22.99 | | 12 Mg 24.31 | | 3 | 4 | 5 | 6 | 7 | 8 | 9 | 10 | 11 | 12 | 13 Al 26.98 | | 14 Si 28.09 | 15 P 30.97 | 16 S 32.06 | 17 Cl 35.45 | 18 Ar 39.95 | | | | | | | | | | | | | | | | | | |
| 19 K 39.10 | | 20 Ca 40.08 | | 21 Sc 44.96 | 22 Ti 47.87 | 23 V 50.94 | 24 Cr 52.00 | 25 Mn 54.94 | 26 Fe 55.85 | 27 Co 58.93 | 28 Ni 58.69 | 29 Cu 63.55 | 30 Zn 65.38 | 31 Ga 69.72 | 32 Ge 72.63 | 33 As 74.92 | 34 Se 78.97 | 35 Br 79.90 | 36 Kr 83.80 | | | | | | | | | | | | | | | | | | | |
| 37 Rb 85.47 | | 38 Sr 87.62 | | 39 Y 88.91 | 40 Zr 91.22 | 41 Nb 92.91 | 42 Mo 95.95 | 43 Tc - | 44 Ru 101.1 | 45 Rh 102.9 | 46 Pd 106.4 | 47 Ag 107.9 | 48 Cd 112.4 | 49 In 114.8 | 50 Sn 118.7 | 51 Sb 121.8 | 52 Te 127.6 | 53 I 126.9 | 54 Xe 131.3 | | | | | | | | | | | | | | | | | | | |
| 55 Cs 132.9 | | 56 Ba 137.3 | | 57-71 | 72 Hf 178.5 | 73 Ta 180.9 | 74 W 183.8 | 75 Re 186.2 | 76 Os 190.2 | 77 Ir 192.2 | 78 Pt 195.1 | 79 Au 197.0 | 80 Hg 200.6 | 81 Tl 204.4 | 82 Pb 207.2 | 83 Bi 209.0 | 84 Po - | 85 At - | 86 Rn - | | | | | | | | | | | | | | | | | | | |
| 87 Fr - | | 88 Ra - | | 89-103 | 104 Rf - | 105 Db - | 106 Sg - | 107 Bh - | 108 Hs - | 109 Mt - | 110 Ds - | 111 Rg - | 112 Cn - | 113 Nh - | 114 Fl - | 115 Mc - | 116 Lv - | 117 Ts - | 118 Og - | | | | | | | | | | | | | | | | | | | |
| | | | | | | | | | | | | | | | | | | | | 57 La 138.9 | | | | | 58 Ce 140.1 | 59 Pr 140.9 | 60 Nd 144.2 | 61 Pm - | 62 Sm 150.4 | 63 Eu 152.0 | 64 Gd 157.3 | 65 Tb 158.9 | 66 Dy 162.5 | 67 Ho 164.9 | 68 Er 167.3 | 69 Tm 168.9 | 70 Yb 173.0 | 71 Lu 175.0 |
| | | | | | | | | | | | | | | | | | | | | 89 Ac - | 90 Th 232.0 | 91 Pa 231.0 | 92 U 238.0 | 93 Np - | 94 Pu - | 95 Am - | 96 Cm - | 97 Bk - | 98 Cf - | 99 Es - | 100 Fm - | 101 Md - | 102 No - | 103 Lr - | | | | |



^1H NMR**Chemical shifts of hydrogen (in ppm / TMS)****H-H coupling constants (in Hz)**

| Hydrogen type | $ J_{ab} $ (Hz) |
|------------------------------------------------------------------|-------------------------------------------------------------------------------------------------|
| $\text{R}_2\text{CH}_a\text{H}_b$ | 4-20 |
| $\text{R}_2\text{H}_a\text{C}—\text{CR}_2\text{H}_b$ | 2-12 if free rotation: 6-8 ax-ax (cyclohexane): 8-12 ax-eq or eq-eq (cyclohexane): 2-5 |
| $\text{R}_2\text{H}_a\text{C}—\text{CR}_2—\text{CR}_2\text{H}_b$ | if free rotation: < 0.1 otherwise (rigid): 1-8 |
| $\text{RH}_a\text{C}=\text{CRH}_b$ | <i>cis</i> : 7-12 <i>trans</i> : 12-18 |
| $\text{R}_2\text{C}=\text{CH}_a\text{H}_b$ | 0.5-3 |
| $\text{H}_a(\text{CO})—\text{CR}_2\text{H}_b$ | 1-3 |
| $\text{RH}_a\text{C}=\text{CR}—\text{CR}_2\text{H}_b$ | 0.5-2.5 |

eq = equatorial, ax = axial

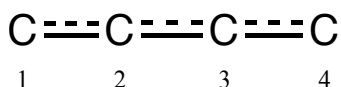
IR spectroscopy table

| Vibrational mode | σ (cm ⁻¹) | Intensity |
|----------------------------------|------------------------------|--------------|
| alcohol O—H (stretching) | 3600-3200 | strong |
| carboxylic acid O—H (stretching) | 3600-2500 | strong |
| N—H (stretching) | 3500-3350 | strong |
| \equiv C—H (stretching) | 3300 | strong |
| =C—H (stretching) | 3100-3000 | weak |
| C—H (stretching) | 2950-2840 | weak |
| —(CO)—H (stretching) | 2900-2800 | weak |
| C \equiv N (stretching) | 2250 | strong |
| C \equiv C (stretching) | 2260-2100 | variable |
| aldehyde C=O (stretching) | 1740-1720 | strong |
| anhydride C=O (stretching) | 1840-1800; 1780-1740 | weak; strong |
| ester C=O (stretching) | 1750-1720 | strong |
| ketone C=O (stretching) | 1745-1715 | strong |
| amide C=O (stretching) | 1700-1500 | strong |
| alkene C=C (stretching) | 1680-1600 | weak |
| aromatic C=C (stretching) | 1600-1400 | weak |
| CH ₂ (bending) | 1480-1440 | medium |
| CH ₃ (bending) | 1465-1440; 1390-1365 | medium |
| C—O—C (stretching) | 1250-1050 | strong |
| C—OH (stretching) | 1200-1020 | strong |
| NO ₂ (stretching) | 1600-1500; 1400-1300 | strong |

| Problem T1 6% | Question | 1 | 2 | 3 | 4 | 5 | 6 | 7 | 8 | 9 | 10 | 11 | Total |
|---------------------|----------|---|---|---|---|---|---|---|-----|-----|----|----|-------|
| | Points | 3 | 4 | 4 | 2 | 3 | 2 | 2 | 4.5 | 2.5 | 3 | 3 | 33 |
| | Score | | | | | | | | | | | | |

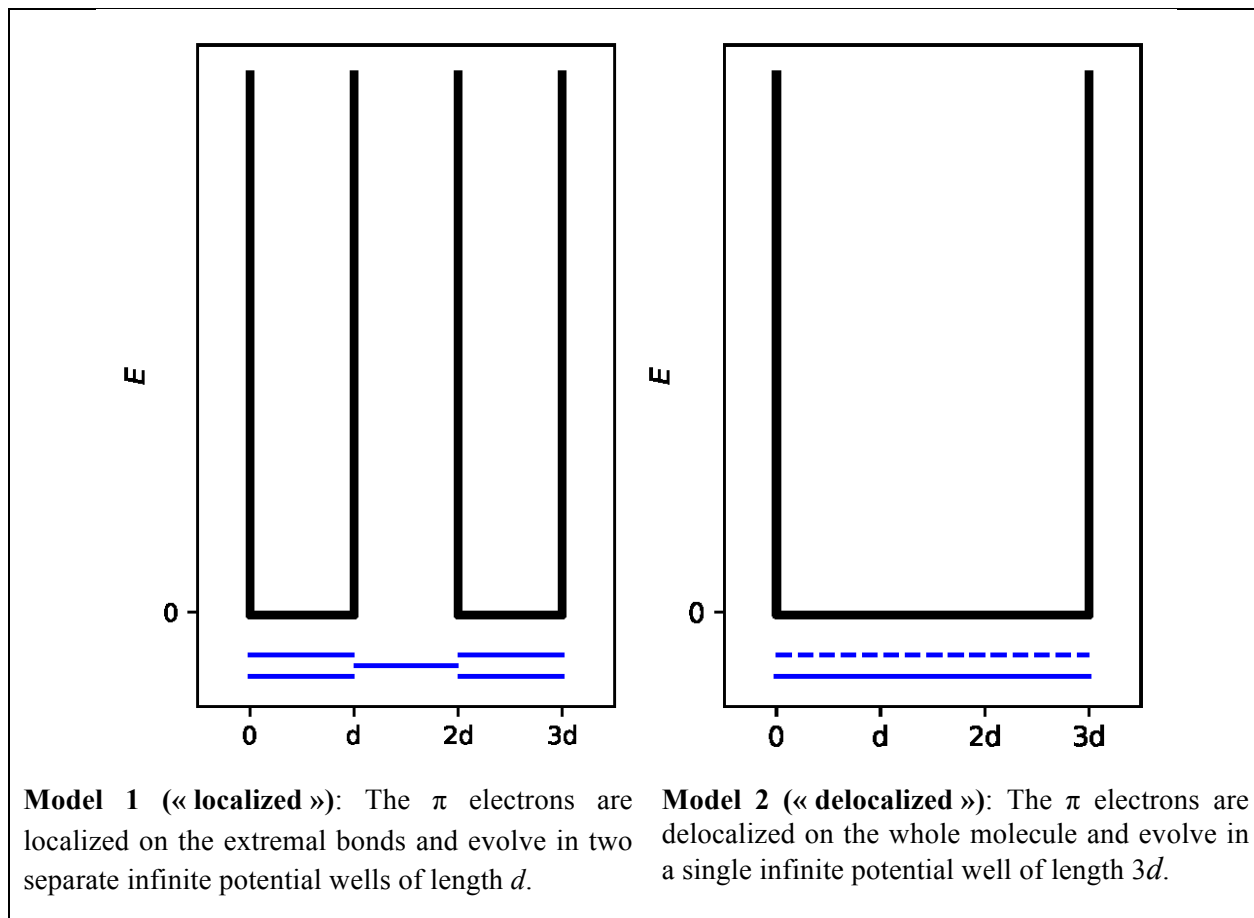
Problem T1: Infinite well and butadiene

The buta-1,3-diene molecule is often written as $\text{CH}_2=\text{CH}-\text{CH}=\text{CH}_2$, with alternating single and double bonds. Nevertheless, its chemical reactivity is not consistent with this description and the π electrons are better described by a distribution along the three bonds:



This system can be modeled as a 1D box (*i.e.* infinite potential well) where the electrons are free. The energy of an electron in an infinite potential well of length L is: $E_n = \frac{n^2 h^2}{8m_e L^2}$, where n is a **non-zero** positive integer.

- Two different models are studied. **Sketch** at least the three lowest-energy levels E_n **for each model** in the respective diagrams, showing how the relative energy levels differ within and between models.



- Place** the π electrons for model 1 in the previous diagrams and **express** the total energy of the π system in model 1, $E(1)$, as a function of h , m_e and d .

$$E(1) =$$

3. **Place** the π electrons for model 2 in the previous diagrams and **express** the total energy of the π system in model 2, $E(2)$, as a function of h , m_e and d .

$$E(2) =$$


The conjugation energy is the total energy of the actual π system, minus the sum of the energies of ethylene molecules involving the same number of electrons.

4. **Express** the conjugation energy ΔE_c of butadiene, as a function of h , m_e and d .

$$\Delta E_c =$$

Models 1 and 2 are too simplistic. A new model will be detailed in the following.

5. **Draw** three other resonance structures of butadiene using Lewis notation.



To take into account the size of carbon atoms, model 2 is now modified into model 3, as follows:

- the new length of the well is L and is located between the abscissa 0 and L ;
- the carbon atoms are located at the abscissas $L/8$; $3L/8$; $5L/8$ and $7L/8$.

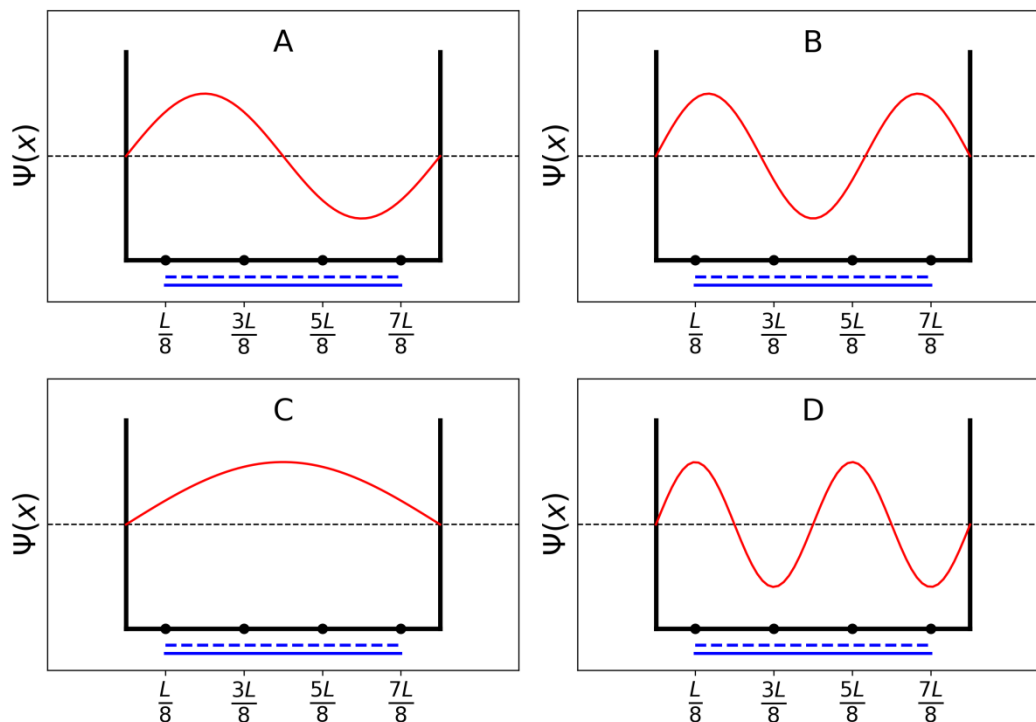
For each level n , the π wavefunction is:

$$\psi_n(x) = \sqrt{\frac{2}{L}} \sin\left(\frac{n\pi x}{L}\right)$$

and the π electron density for a system with N π electrons is:

$$\rho(x) = 2 \sum_{i=1}^{N/2} |\psi_i(x)|^2$$

The four π wavefunctions, which correspond to the molecular orbitals of the π system, are depicted below (**arbitrary order**).



6. **Sort** the energies of the four π wavefunctions (E_A , E_B , E_C and E_D).

<
<
<

7. **Give** the labels (A, B, C or D) of the orbitals that are filled with electrons in butadiene.

8. Within model 3, **give** the values of the π wavefunctions ψ_n for occupied levels at positions 0, $L/4$ and $L/2$, for $n = 1$ and $n = 2$, as a function of L .

$$\psi_1(0) =$$

$$\psi_1\left(\frac{L}{4}\right) =$$

$$\psi_1\left(\frac{L}{2}\right) =$$

$$\psi_2(0) =$$

$$\psi_2\left(\frac{L}{4}\right) =$$

$$\psi_2\left(\frac{L}{2}\right) =$$

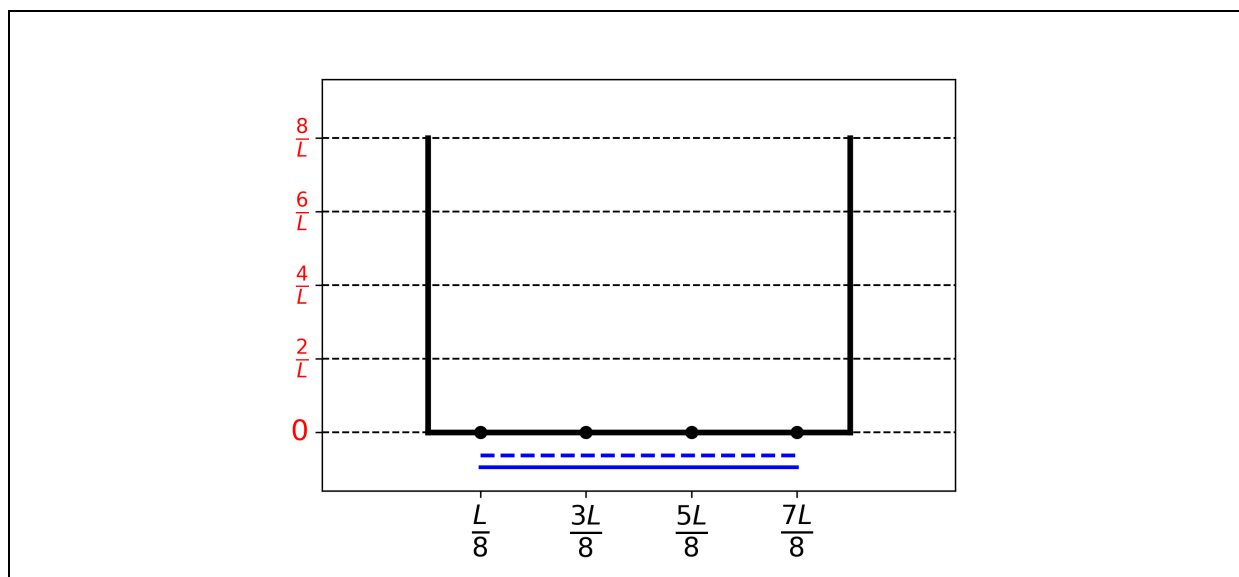
9. Within model 3, **give** the value of the π electron density at positions 0, $L/4$ and $L/2$.

$$\rho(0) =$$

$$\rho\left(\frac{L}{4}\right) =$$

$$\rho\left(\frac{L}{2}\right) =$$

10. **Draw** the π electron density curve between 0 and L .



11. **Sort** the following CC bonds (B1, B2, ..., B5) by increasing length, using the symbols = or <:

- B1: C1C2 in a butadiene molecule
- B2: C2C3 in a butadiene molecule
- B3: C3C4 in a butadiene molecule
- B4: CC in an ethane molecule
- B5: CC in an ethene molecule

| Problem | Question | 1 | 2 | 3 | 4 | 5 | 6 | 7 | 8 | 9 | 10 | Total |
|---------|----------|---|---|---|---|---|---|---|---|---|----|-------|
| T2 | Points | 1 | 4 | 2 | 3 | 3 | 6 | 4 | 1 | 8 | 2 | 34 |
| 7% | Score | | | | | | | | | | | |

Problem T2: Hydrogen production by water-splitting

Data:

| Compound | H ₂ (g) | H ₂ O (l) | H ₂ O (g) | O ₂ (g) |
|----------------------------------------------------|--------------------|----------------------|----------------------|--------------------|
| $\Delta_f H^\circ$ (kJ mol ⁻¹) | 0 | -285.8 | -241.8 | 0 |
| S_m° (J mol ⁻¹ K ⁻¹) | 130.6 | 69.9 | 188.7 | 205.2 |

Molecular hydrogen (H₂) can be used as an alternative to carbon dioxide-emitting fuels. Hence, lowering the cost and the environmental impact of its production is a major challenge. In this field, water-splitting is a promising candidate technology.

1. **Write down** the balanced equation of liquid water splitting reaction using a stoichiometric coefficient of 1 for water.

2. Using only the provided thermodynamic data, **justify numerically** whether this reaction is thermodynamically favorable at 298 K.

Calculations:

Reaction thermodynamically favorable?

☐ Yes

☐ No

Water splitting can be performed electrochemically using two inert electrodes in an acidic water bath, connected by a generator (Fig. 1). Gas bubbles are formed at both electrodes.

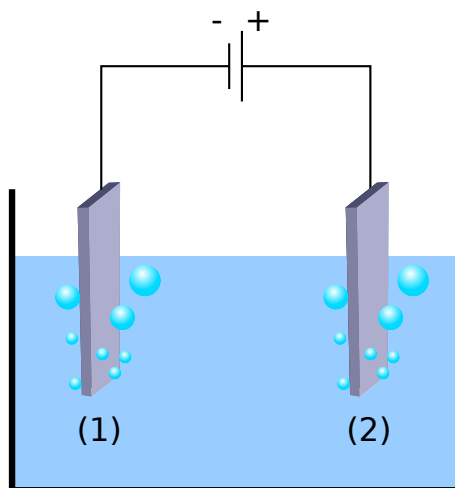


Fig. 1 – Water-splitting electrochemical cell.

3. **Write down** the balanced net electrochemical half reactions occurring at each electrode.

On electrode (1):

On electrode (2):

4. Using only the provided thermodynamic data (or question 2), **derive** the condition on the applied voltage between electrodes $\Delta E_{\text{applied}}$ compared to a value ΔE_{th} (to be determined) for the process to be thermodynamically favorable at 298 K, when all reactants and products are in their standard state. **Tick** the right condition and **give** the numerical value with 3 decimal places.

Calculation:

- ☐ $\Delta E_{\text{applied}} = \Delta E_{\text{th}}$
☐ $\Delta E_{\text{applied}} > \Delta E_{\text{th}}$
☐ $\Delta E_{\text{applied}} < \Delta E_{\text{th}}$

where, $\Delta E_{\text{th}} = \dots\dots\dots$ V (give the result with 3 decimal places)

If you could not calculate ΔE_{th} , the value 1.200 V can be used in the rest of the problem.

Experimentally, a higher voltage is needed to observe water splitting. For a given Pt cathode, the minimum voltage necessary to observe water splitting, ΔE_{min} , depends on the nature of the anode, as displayed in the table below:

| Anode | ΔE_{\min} (V) |
|--------------------------------|-----------------------|
| IrO _x | 1.6 |
| NiO _x | 1.7 |
| CoO _x | 1.7 |
| Fe ₂ O ₃ | 1.9 |

The difference between ΔE_{\min} and ΔE_{th} is responsible for losses in the device.

5. **Give** the expression of the device power efficiency η_{elec} (fraction of the power used for water splitting) as a function of ΔE_{th} and ΔE_{\min} . Assuming an identical current value I , **calculate** the water electrolysis power efficiency when a Pt cathode and a Fe₂O₃ anode are used. **Identify** the most efficient anode from the above table.

$\eta_{\text{elec}} =$

Power efficiency when a Pt and a Fe₂O₃ electrodes are used:

$\eta_{\text{elec}} =$ %

Most efficient anode:

If you could not calculate η_{elec} , the value $\eta_{\text{elec}} = 75\%$ can be used in the rest of the problem.

An alternative to water electrolysis is direct photocatalytic water-splitting. It uses a semiconductor that can be activated by absorbing light.

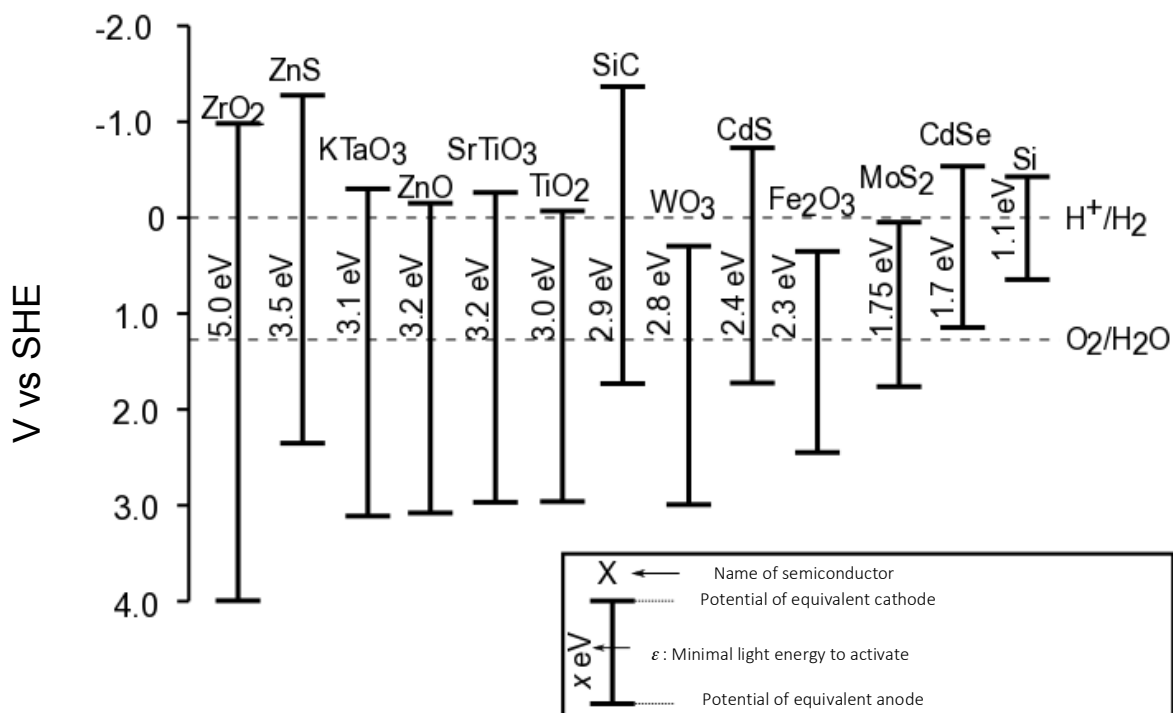


Fig. 2 – Activation condition and equivalent electrode potentials of different semiconductors. Dashed lines correspond to water oxidation and reduction potentials. SHE = Standard Hydrogen Electrode

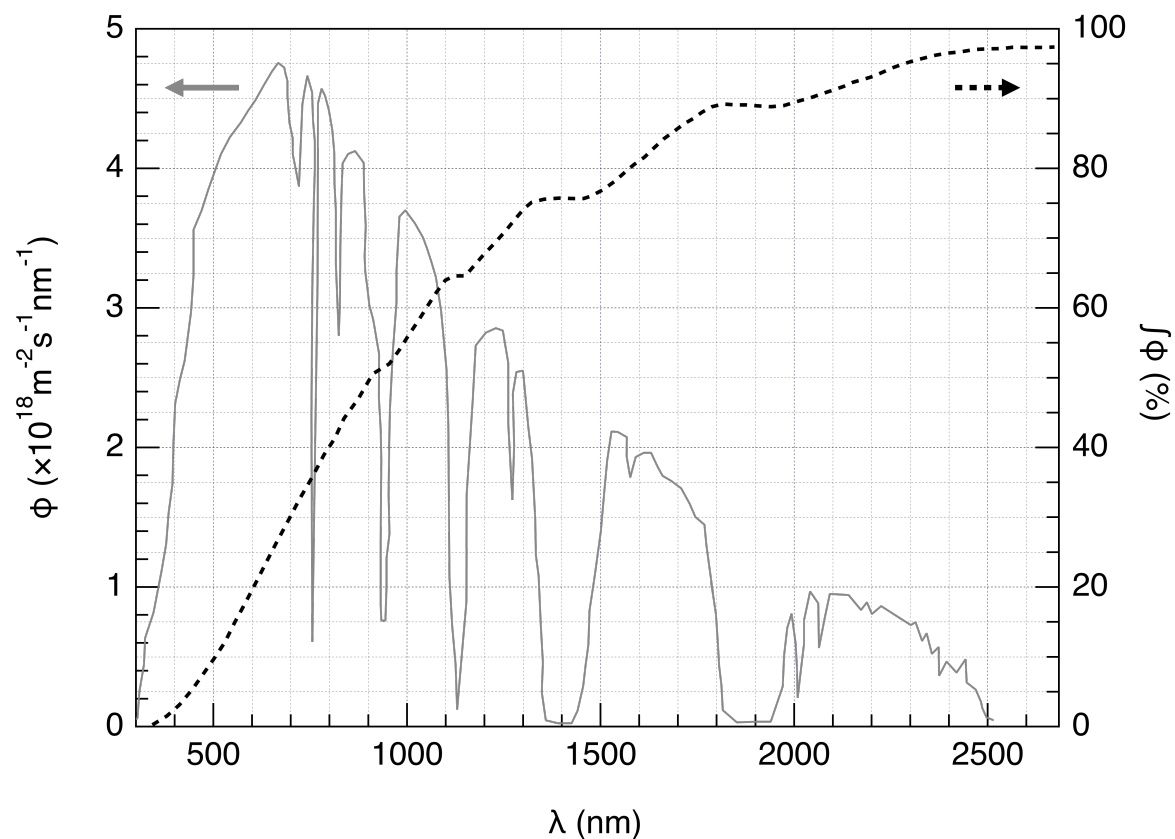


Fig. 3 – Left axis: Spectral distribution of the solar photon flux ϕ . The photon flux is the number of photons per unit area per unit time arriving on the semiconductor. Right axis and dashed line: cumulative photon flux (i.e. fraction of the photon flux with smaller wavelength).

6. **Estimate** the fraction of the solar photon flux that can activate the following semiconductors: TiO_2 , CdS , Si . **State** explicitly the equations and units used for the computation.

Explanation / calculation:

| | |
|--|--|
| | |
|--|--|

| | Approximate fraction |
|------------------|----------------------|
| TiO ₂ | % |
| CdS | % |
| Si | % |

Activation of the semi-conductor results in a modification of the surface potentials, so that it can be seen as two electrodes of different potentials.

7. Using the data in Fig 2, **choose** the semiconductor(s) from the following list that, once activated, can play both roles of anode and cathode for water-splitting reaction.

| | | | |
|-------------------------------------------|---------------------------------------------------------|-------------------------------------------|------------------------------------------|
| <input type="checkbox"/> ZrO ₂ | <input type="checkbox"/> ZnO | <input type="checkbox"/> TiO ₂ | <input type="checkbox"/> WO ₃ |
| <input type="checkbox"/> CdS | <input type="checkbox"/> Fe ₂ O ₃ | <input type="checkbox"/> CdSe | <input type="checkbox"/> Si |

8. **Give** the semiconductor that, used as both cathode and anode, is expected to be the most efficient for water splitting upon a given solar shining.

| |
|--|
| |
|--|

The evolution of H₂ and O₂ when a semiconductor is irradiated by simulated solar light at $T = 25\text{ }^{\circ}\text{C}$ at p_{atm} was recently studied. Using an incident light of power $P = 1.0\text{ kW m}^{-2}$ and a photoelectrode with a surface of area $S = 16\text{ mm}^2$, the production of $V = 0.37\text{ cm}^3$ of H₂(g) was measured after $\Delta t = 1$ hour of reaction.

9. **Calculate** the power efficiency η_{direct} of the conversion.

Calculation:

| |
|--|
| |
|--|

$$\eta_{\text{direct}} = \quad \%$$

If you could not calculate η_{direct} , the value $\eta_{\text{direct}} = 10\%$ can be used in the rest of the problem.

Two modes of converting solar energy to hydrogen can thus be compared: direct photocatalysis, and indirect photo-electrolysis combining a photovoltaic panel with an electrolyzer. The efficiency of photovoltaic panels on the market is around $\eta_{\text{panels}} = 20\%$.

10. **Compare** the power efficiencies of the two modes, η_{direct} and η_{indirect} , using Fe_2O_3 and Pt electrodes for the electrolysis.

Calculation:

☐ $\eta_{\text{direct}} > \eta_{\text{indirect}}$

☐ $\eta_{\text{direct}} \approx \eta_{\text{indirect}}$

☐ $\eta_{\text{direct}} < \eta_{\text{indirect}}$

| Problem | Question | 1 | 2 | 3 | 4 | 5 | 6 | 7 | 8 | 9 | 10 | 11 | 12 | Total |
|----------|----------|---|---|---|---|---|---|---|---|---|----|----|----|-------|
| T3 5% | Points | 1 | 3 | 3 | 3 | 4 | 2 | 7 | 2 | 2 | 3 | 4 | 6 | 40 |
| | Score | | | | | | | | | | | | | |

Problem T3: About silver chloride

Data at 298 K:

$$pK_{s1}(\text{AgCl}) = 9.7; pK_{s2}(\text{Ag}_2\text{CrO}_4) = 12$$

$$\text{Formation constant of the complex } [\text{Ag}(\text{NH}_3)_n]^+: \beta_n = 10^{7.2}$$

Potentials against the standard hydrogen electrode:

$$\text{Standard potential of } \text{Ag}^+/\text{Ag(s)}: E^\circ(\text{Ag}^+/\text{Ag(s)}) = 0.80 \text{ V}$$

$$\text{Apparent potential of } \text{O}_2(\text{aq})/\text{HO}^-(\text{aq}) \text{ (in seawater)}: E'(\text{O}_2(\text{aq})/\text{HO}^-(\text{aq})) = 0.75 \text{ V}$$

Part A: Quotes from a chemistry lesson by Louis Joseph Gay-Lussac

The following quotes from a chemistry lesson by Louis Joseph Gay-Lussac (French chemist and physicist, 1778–1850) deal with some properties of silver chloride.

Quote A: “I will now talk about silver chloride, a milk-white solid. It is easily obtained by pouring hydrochloric acid into an aqueous solution of silver nitrate.”

Quote B: “This salt has no taste since it is insoluble.”

Quote C: “This compound is completely insoluble in alcohol and even in acids, except in concentrated hydrochloric acid which dissolves it readily.”

Quote D: “On the other hand, silver chloride is highly soluble in aqueous solution of ammonia.”

Quote E: “Then, we can make silver chloride appear again by adding an acid which reacts with ammonia.”

Quote F: “If you take a bowl made of silver to evaporate salty seawater, you will get impure sodium chloride, mixed with a milk-white solid.”

1. **Quote A:** Write the balanced chemical equation of AgCl(s) synthesis.

2. **Quote B:** Calculate the solubility s of AgCl(s) in water at 298 K in mol L^{-1} .

Calculation:

$s = \quad \quad \quad \text{mol L}^{-1}$

3. **Quote C:** In a highly concentrated solution of chloride ions, a well-defined complex of stoichiometry 1:2 is formed. On the following qualitative axis (with pCl increasing from left to right), **place** in each domain the silver-containing species that is predominant (or exists, for solids). pCl values at frontiers are not expected.



Quote D: When ammonia is added to silver chloride, a well-defined complex of stoichiometry “n” is formed.

4. **Write** the balanced equation corresponding to the synthesis of the complex $[Ag(NH_3)_n]^+$ from silver chloride and **calculate** the corresponding equilibrium constant.

Equation:

Calculation:

$$K =$$

If you could not calculate K, the following value can be used in the rest of the problem: $K = 10^{-3}$

5. Ammonia is added to 0.1 mol of silver chloride in 1 L of water until the last grain of solid disappears. At this moment, $[NH_3] = 1.78 \text{ mol L}^{-1}$. **Determine** the stoichiometry of the complex neglecting dilution effects.

Calculation:

$$n =$$

6. **Write** the balanced chemical equation corresponding to **quote E**.

7. Assuming that seawater is slightly basic and rich in dioxygen, and that silver metal can reduce dioxygen in such conditions, **write** a balanced chemical equation corresponding to the formation of the solid mentioned in **quote F**. A stoichiometric coefficient of 1 will be chosen for dioxygen. **Calculate** its equilibrium constant (K) at 298 K.

Equation:

Calculation:

$K =$

Part B: The Mohr method

The Mohr method is based on the colorimetric titration of Cl^- by Ag^+ in the presence of potassium chromate (2K^+ , CrO_4^{2-}). Three drops (~ 0.5 mL) of a K_2CrO_4 solution ($\sim 7.76 \times 10^{-3} \text{ mol L}^{-1}$) are added to $V_0 = 20.00$ mL of a sodium chloride solution of unknown concentration C_{Cl} . This solution is then titrated by silver nitrate (Ag^+ , NO_3^-) at $C_{\text{Ag}} = 0.050 \text{ mol L}^{-1}$, which immediately leads to the formation of solid **A**. A red precipitate (solid **B**) appears at $V_{\text{Ag}} = 4.30$ mL.

8. **Write** the balanced equations of the two reactions occurring during the experiment.
Calculate the corresponding equilibrium constants.

$$K^{\circ}_1 =$$

$$K^{\circ}_2 =$$

9. **Identify** the solids.

Solid **A**:

Solid **B**:

10. **Calculate** the unknown concentration C_{Cl} of chloride ions in the sodium chloride solution.

Calculation:

$$C_{\text{Cl}} = \quad \text{mol L}^{-1}$$

If you could not calculate C_{Cl} , the value $C_{\text{Cl}} = 0.010 \text{ mol L}^{-1}$ can be used in the rest of the problem.

11. **Calculate** the minimal volume $V_{\text{Ag}}(\text{min})$ for which $\text{AgCl}(\text{s})$ precipitates.

Calculation:

$$V_{\text{Ag}}(\text{min}) = \quad \text{mL}$$

12. **Calculate** the residual concentration $[\text{Cl}^-]_{\text{res}}$ of chloride ions when silver chromate begins to precipitate. Mathematically **justify** why CrO_4^{2-} is a good titration endpoint indicator by comparing two values.

Calculation:

$$[\text{Cl}^-]_{\text{res}} = \quad \text{mol L}^{-1}$$

CrO_4^{2-} is a good titration endpoint indicator because:

| Problem | Question | 1 | 2 | 3 | 4 | 5 | 6 | 7 | 8 | Total |
|----------|----------|---|---|---|---|---|---|---|----|-------|
| T4 7% | Points | 6 | 9 | 8 | 5 | 6 | 2 | 2 | 12 | 50 |
| | Score | | | | | | | | | |

Problem T4: From gunpowder to the discovery of iodine

In the 19th century, the French entrepreneur B. Courtois specialized in the production of nitrate **A** ($\mathbf{M_A(NO_3)_m}$), used for gunpowder. Initially imported from Asia, **A** was later produced from nitrate **B** ($\mathbf{M_B(NO_3)_n}$) using an exchange reaction with compound **C**, obtained from algae.

1. **Find** the formulae of nitrates **A** and **B** knowing that they are anhydrous salts of alkaline or alkaline-earth metals ($\mathbf{M_A}$ and $\mathbf{M_B}$). One of the nitrates contains no more than 1 wt% of non-metallic impurities while the other contains 9 ± 3 wt% of non-metallic impurities. The content of metals $\mathbf{M_A}$ and $\mathbf{M_B}$ in the samples is 38.4 wt% and 22.4 wt% respectively. **Support** your answer with calculations.

A: and **B:**

To obtain **A**, 262.2 g of a solid compound **C** were added to a solution containing 442.8 g of **B**. **B** is known to be in excess. As a result, 190.0 g of white precipitate **D** was formed and removed by filtration. The filtrate was evaporated, and the obtained solid mixture **E** was heated until the mass of the sample (containing only nitrites, NO_2^-) was constant. The only gaseous product was dioxygen: 60.48 L at 0 °C at 1 atm (dioxygen can be considered as an ideal gas).

2. **Calculate** the composition (in wt%) of the mixture **E** considering that it contained only compounds **A** and **B** and no other impurities, and that **C** was taken in pure anhydrous state.

wt % of **A**: and of **B**:

3. **Determine** the formulae of compounds **C** and **D** and **write** the balanced reaction equation between **B** and **C**.

C:

and **D:**

Reaction between **B** and **C**:

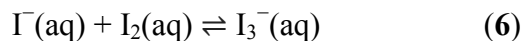
In 1811, when working with algae ashes, Courtois observed that copper vessels were worn out faster than usual. While he was studying this phenomenon, his cat entered the laboratory and spilled the solution of concentrated sulfuric acid on the dry algae ashes: violet vapors instantly came out of the vessel (**1**, sulfuric acid is the oxidizing agent): iodine (I_2) had just been discovered! Iodine was the cause of the copper corrosion (**2**). However, because of the medicinal applications of iodine, Courtois started manufacturing it by reaction of algae ashes with chlorine (**3**).

Nowadays, iodine is prepared from the set of reactants (NO_3^- , I^- , H^+) (**4**) or (IO_3^- , I^- , H^+) (**5**).

4. **Write** balanced equations for the reactions **1–5**.

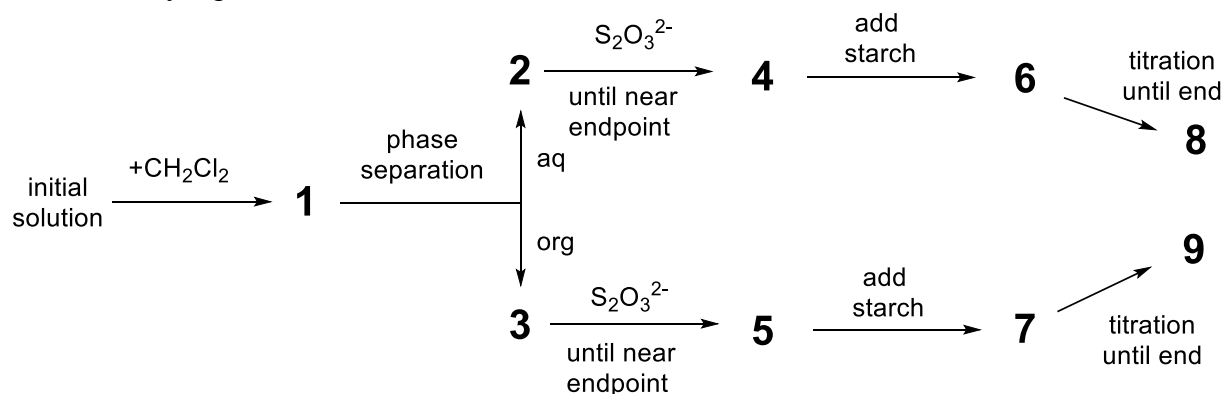
| |
|----------|
| 1 |
| 2 |
| 3 |
| 4 |
| 5 |

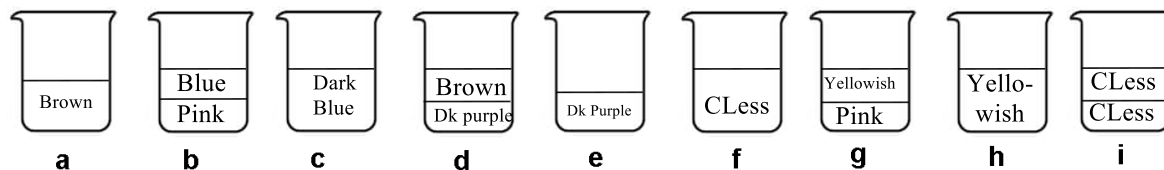
The solubility of iodine is very low in water but significantly increases when iodide ions are added. Together they form ions such as triiodide, I_3^- :



Equilibrium (**6**) can be studied through the extraction of I_2 with dichloromethane. Indeed, I^- and I_3^- do not dissolve in organic solvents but I_2 does and, when extracted, it is 15 times more concentrated in dichloromethane than in water.

The following experiment was performed. To prepare the initial solution, a few crystals of solid iodine were dissolved in 50.0 mL of an aqueous solution of potassium iodide (0.1112 g). Then, 50.0 mL of dichloromethane were added, and the mixture was vigorously shaken until equilibration. After phase separation, each phase was titrated by 16.20 mL (organic phase) and by 8.00 mL (aqueous phase) of the standard aqueous solution of sodium thiosulphate pentahydrate (14.9080 g in 1.000 L of solution) in the presence of starch. The process is schematically represented below:





CLess = colourless Dk = dark

5. **Find** the correspondence between the stages on the scheme (1–9) and the schematic pictures representing them (a–i).

| Stages | Picture |
|--------|---------|
| 1 | |
| 2 | |
| 3 | |
| 4 | |
| 5 | |
| 6 | |
| 7 | |
| 8 | |
| 9 | |

6. **Write** balanced equations for the two possible chemical reactions in the aqueous phase during the titration involving iodine species and sodium thiosulphate.

7. **Calculate** the mass of iodine used to prepare the initial solution.

$$m(\text{I}_2) = \quad \text{g}$$

8. **Calculate** the equilibrium constant K° for equilibrium of reaction (6).

$$K^{\circ} =$$

| Problem T5 8% | Question | 1 | 2 | 3 | 4 | 5 | 6 | 7 | 8 | 9 | 10 | 11 | 12 | Total |
|---------------------|----------|---|---|---|---|---|---|---|---|---|----|----|----|-------|
| | Points | 3 | 4 | 4 | 2 | 5 | 5 | 4 | 3 | 5 | 2 | 2 | 2 | 41 |
| | Score | | | | | | | | | | | | | |

Problem T5: Azobenzene – β -cyclodextrin complexes for the formation of nanomachines

Nanomachines are molecular assemblies that enable the transformation of an energy source into a nano-movement for applications such as drug delivery. Numerous nanomachines make use of the isomerization of azo compounds ($R-N=N-R'$) upon irradiation.

1. **Draw** the stereoisomers of azobenzene ($H_5C_6-N=N-C_6H_5$) and **draw** a line between the two carbon atoms that are the furthest apart. **Compare** these two distances (d_{trans} and d_{cis}).

| | |
|-------------------------------------------------------------------------------------------------------------------------------------------|------------|
| <i>trans</i> | <i>Cis</i> |
| Comparison: d_{trans} d_{cis} | |

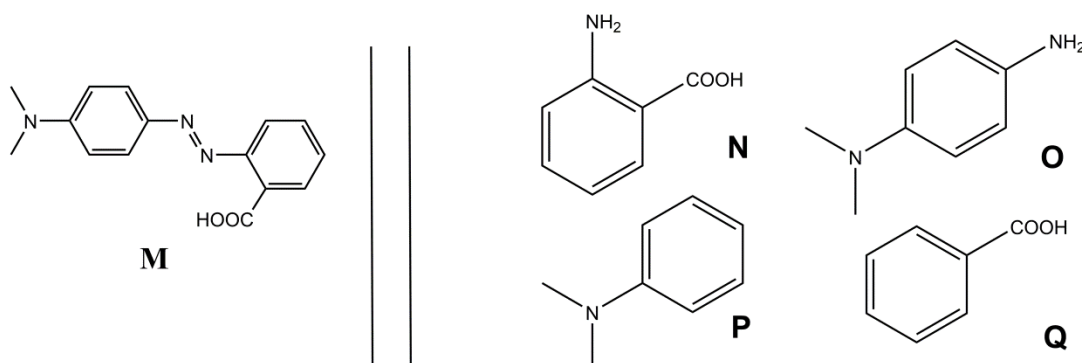


Fig. 1 – Possible reactants for the synthesis of **M**.

2. **M** can be synthesized in two steps from simple reactants (Fig. 1). **Choose** among the suggested reactants (**N** to **Q**) the ones that can provide **M** with very high regioselectivity. Sodium nitrite (NaNO_2) in cold aqueous hydrochloric acid is used as reagent for the first step of the synthesis.

Reactants: _____ and _____

Determination of the association constant K_t

β -cyclodextrin (**C**, Fig. 2) is a cyclic heptamer of glucose, which can form inclusion complexes with azo compounds. In tasks 3 to 6, we will determine by spectroscopy the association constant K_t , corresponding to the formation of the inclusion complex CM_{trans} as depicted in Fig. 2.

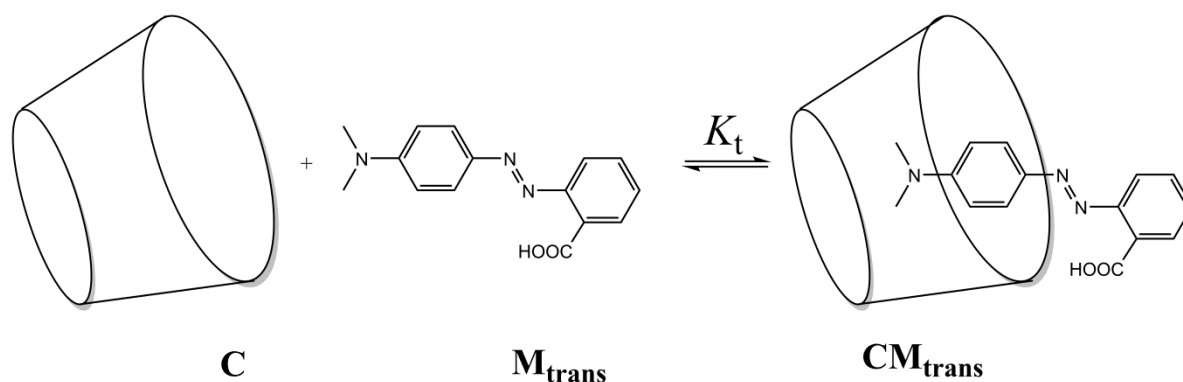


Fig. 2 – Formation of the CM_{trans} inclusion complex.

Several solutions are prepared by mixing **C** and M_{trans} in different proportions to reach initial concentrations $[\text{C}]_0$ and $[\text{M}_{\text{trans}}]_0$. While $[\text{M}_{\text{trans}}]_0$ is identical for all solutions, $[\text{C}]_0$ varies. We follow, at a fixed wavelength, the evolution of the difference in absorbance ΔA between the absorbance of each solution and the pure M_{trans} solution. We note the molar absorption coefficients of CM_{trans} and M_{trans} , $\epsilon_{\text{CM}_{\text{trans}}}$ and $\epsilon_{\text{M}_{\text{trans}}}$, respectively. L is the path length of the beam through the sample. The absorbance of **C** (ϵ_{C}) at the same wavelength is negligible.

3. **Demonstrate** that $\Delta A = \alpha \cdot [\text{CM}_{\text{trans}}]$ and **express** α in terms of known constant(s).

Demonstration:

$$\alpha =$$

4. **Demonstrate** that, when **C** is in large excess with respect to **M_{trans}** (i.e. $[C]_0 \gg [M_{trans}]_0$), the concentration of **C** may be considered as constant, $[C] \approx [C]_0$.

Demonstration:

5. **Demonstrate** that, when **C** is in large excess with respect to **M_{trans}** (i.e. $[C]_0 \gg [M_{trans}]_0$), $\Delta A = \alpha \cdot \frac{\beta \cdot [C]_0}{1 + K_t \cdot [C]_0}$ and **express** β in terms of constant(s) and initial concentration(s).

Demonstration:

$$\beta =$$

6. **Determine** K_t using the following experimental curve (Fig. 3).

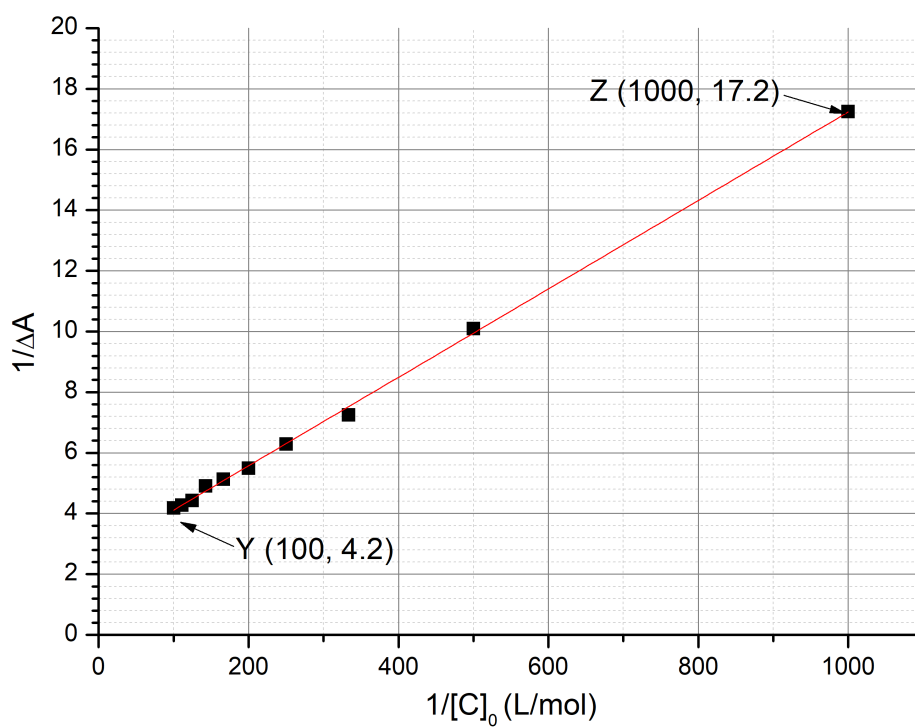


Fig. 3 – Evolution of $1/\Delta A$ as a function of $1/[C]_0$.

Calculations:

$$K_t =$$

Determination of the association constant K_c

In tasks 7 to 9, we will determine by kinetic studies the association constant K_c , corresponding to the formation of the inclusion complex with M_{cis} , CM_{cis} . A sample containing only M_{trans} is irradiated, thus producing a known amount of M_{cis} , $[M_{cis}]_0$. M_{cis} (free or within the inclusion complex) then thermally isomerizes into M_{trans} . In the absence of C , the isomerization follows a first order kinetics with a rate constant k_1 . All complexation equilibria are much faster than the isomerization processes. The kinetic scheme corresponding to this experiment is provided in Fig. 4.

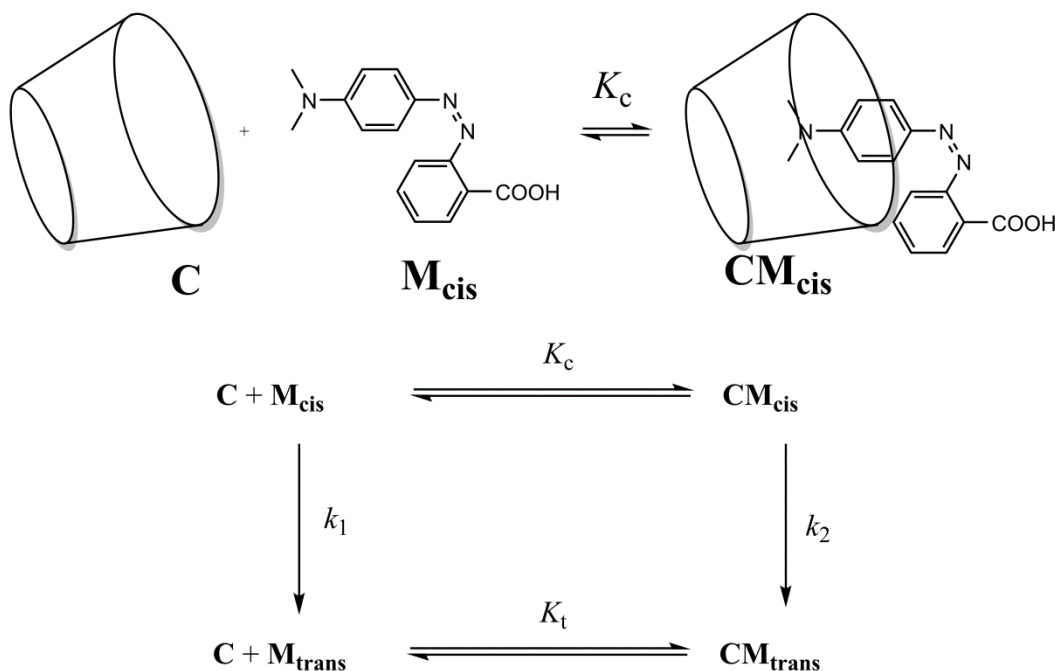


Fig. 4 – Kinetics scheme for the isomerization of M_{cis} in the presence of C .

The rate of disappearance r for the total amount of M_{cis} (free and complexed) is defined as

$$r = k_1[M_{cis}] + k_2[CM_{cis}]$$

Experimentally, r follows an apparent first order kinetic law with an apparent rate constant k_{obs} :

$$r = k_{obs}([M_{cis}] + [CM_{cis}])$$

7. **Demonstrate** that $k_{obs} = \frac{\gamma + \delta \cdot k_2[C]}{1 + K_c[C]}$ and **express** γ and δ in terms of known constant(s).

Demonstration:

$$\gamma = \quad \quad \quad \text{and} \quad \quad \quad \delta =$$


8. **Choose** in which condition(s) the half-life $t_{1/2}$ corresponding to k_{obs} can be expressed as $t_{1/2} = \frac{\ln 2}{\gamma} (1 + K_c[\text{C}]_0)$ given that $[\text{C}]_0 \gg [\text{M}_{\text{cis}}]_0$. Mathematically **justify** your answer.

- ☐ Very slow isomerization of M_{cis} within cyclodextrin
☐ Very slow isomerization of free M_{cis}
☐ CM_{cis} very stable
☐ CM_{trans} very stable

Demonstration:

9. Assuming the condition(s) in task 8 satisfied, **determine** K_c by a linear regression using the data below. You may use a calculator or plot a graph.

| $[\text{C}]_0$ (mol L ⁻¹) | $t_{1/2}$ (s) | $[\text{C}]_0$ (mol L ⁻¹) | $t_{1/2}$ (s) |
|---------------------------------------|---------------|---------------------------------------|---------------|
| 0 | 3.0 | $3.0 \cdot 10^{-3}$ | 5.9 |
| $1.0 \cdot 10^{-4}$ | 3.2 | $5.0 \cdot 10^{-3}$ | 7.7 |
| $5.0 \cdot 10^{-4}$ | 3.6 | $7.5 \cdot 10^{-3}$ | 9.9 |
| $1.0 \cdot 10^{-3}$ | 4.1 | $1.0 \cdot 10^{-2}$ | 12.6 |



Equation of the linear regression:

$$K_c =$$

Formation of nanomachines

Another azobenzene compound (for which $K_c \ll K_t$), initially in the *trans* form, is covalently grafted on silica (Fig. 5). The silica pores are filled with a dye (rhodamine B, grey circles in Fig. 5). Upon addition of **C**, an inclusion complex is formed, which blocks the pores and prevents the release of the dye.

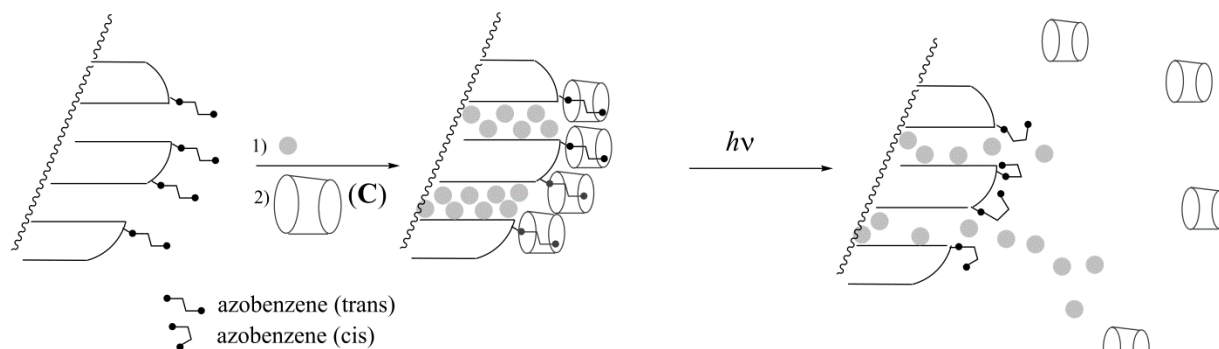


Fig. 5 – Cleavage of an azobenzene–cyclodextrin inclusion complex induced by a light-triggered isomerization, which allows delivery of a dye (grey filled circle).

10. **Choose** the most appropriate condition (one choice only) so that the pores are initially blocked in the presence of **C**, and the dye can be released upon irradiation.

- ☐ $K_t \gg 1$
☐ $K_t \gg 1$ and $K_c \ll 1$
☐ $K_t / K_c \ll 1$
☐ $K_t \gg 1$ and $K_c \gg 1$
☐ $K_c \ll 1$

This azobenzene-silica powder loaded with a dye is placed in the corner of a cuvette (Fig. 6) so that this powder cannot move in the solution. The powder is irradiated at a wavelength λ_1 to trigger the release of the dye from the pores (Fig. 5). To monitor this release by absorbance spectroscopy we measure the absorbance of the solution at wavelength λ_2 .

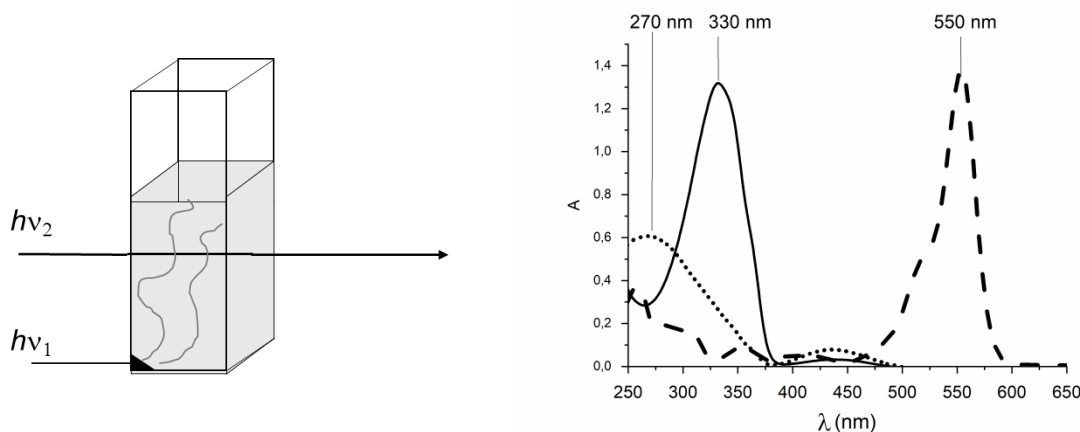


Fig. 6 – Left: experimental setup used to monitor the release of the dye; right: absorption spectra of trans-azobenzene (continuous line), cis-azobenzene (dotted line) and rhodamine B (dashed line).

11. **Determine** λ_1 .

$\lambda_1 =$ nm

12. **Determine** λ_2 .

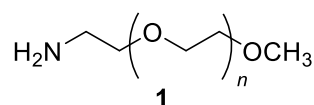
$\lambda_2 =$ nm

| Problem | Question | 1 | 2 | 3 | 4 | 5 | 6 | 7 | 8 | 9 | Total |
|---------|----------|---|---|---|---|----|---|---|---|---|-------|
| T6 | Points | 4 | 4 | 5 | 3 | 10 | 2 | 9 | 6 | 5 | 48 |
| 8% | Score | | | | | | | | | | |

Problem T6: Characterization of a block-copolymer

Block-copolymers, obtained by linking different polymers (blocks), have unique properties such as the ability to self-assemble. In this problem, the synthesis and characterization of such a macromolecule are studied.

Study of the first block



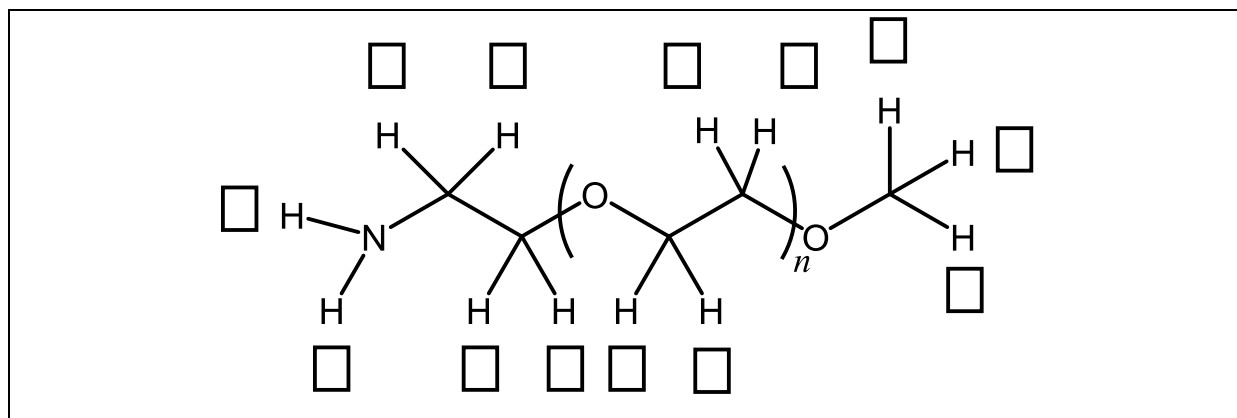
In this first part, we will study the water soluble homopolymer **1** (α -methoxy- ω -aminopolyethyleneglycol).

The ^1H NMR spectrum of **1** ($\text{DMSO}-d_6$, 60 °C, 500 MHz) includes the following signals:

| Index | δ (ppm) | Peak Area |
|-------|----------------|-----------|
| a | 2.7* | 0.6 |
| b | 3.3 | 0.9 |
| c | 3.4 | 0.6 |
| d | ~ 3.5 | 133.7 |

Table 1, *in the presence of D_2O , the signal at 2.7 ppm disappears.

- Match** the ^1H NMR signals (a, b, c, d) from Table 1 with each of the corresponding protons.



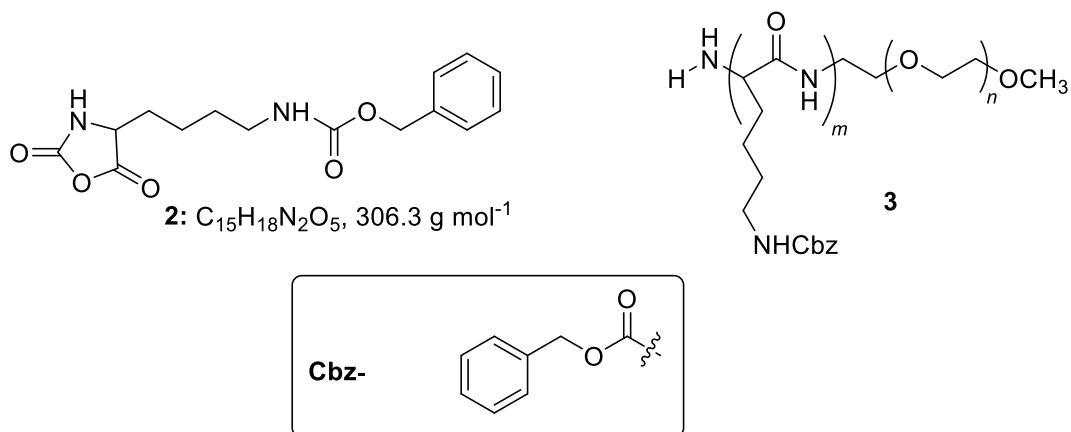
- Express** the average degree of polymerization n as a function of the area $A_{\text{OCH}_2\text{H}_4}$ of the NMR peak of the repeating unit and the area A_{OCH_3} of the NMR peak of the methyl end group. **Calculate** n .

$$n =$$

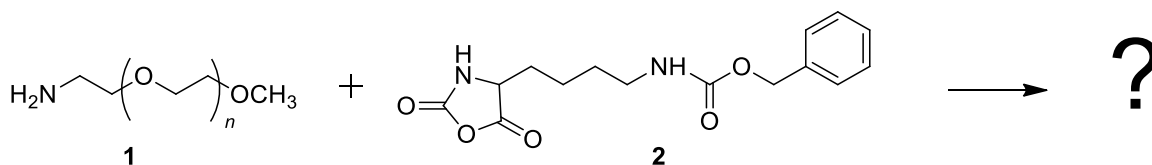
If you could not calculate n , the value $n = 100$ can be used in the rest of the problem.

Study of a diblock-copolymer

The synthesis of the second block of the copolymer is performed through the reaction of **1** with **2** (ϵ -(benzyloxycarbonyl)-lysine *N*-carboxyanhydride). This yields the block-copolymer **3**.

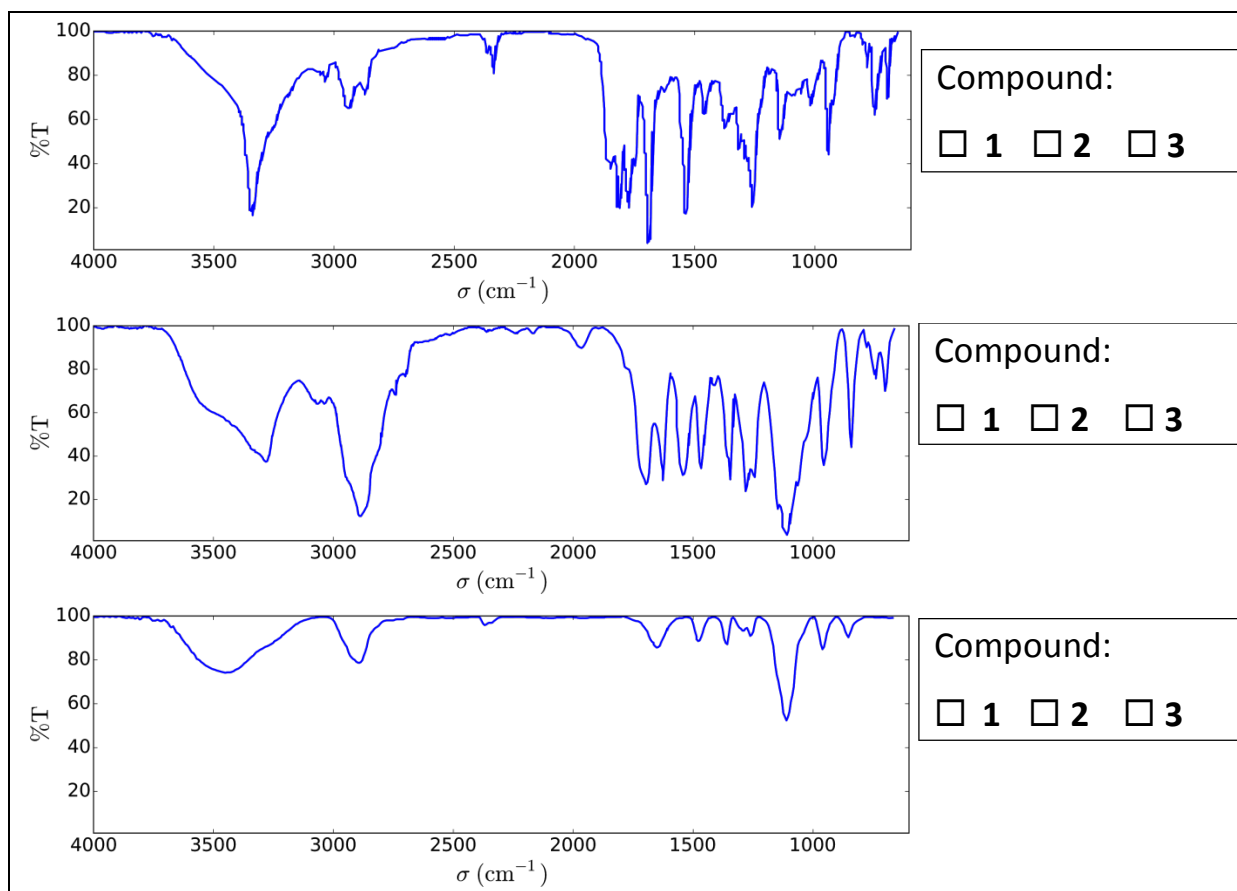


3. **Draw** the structure of the reaction **intermediate** that is formed in the first step of the addition of **1** to **2**. The second step of the mechanism leads to the formation of a gas molecule, **G**. Also **draw** the structure of **G**.



G:

4. Infrared (IR) measurements are performed to characterize the compounds. **Match** the three IR spectra with compounds **1**, **2** and **3**.



5. The ^1H NMR spectrum of copolymer **3** (in $\text{DMSO-}d_6$, at 60 °C, 500 MHz) is reported in Fig. 1. Using some or all of the NMR signals, the areas of which are reported in Table 2, **calculate** its number average molar mass M_n , considering n from question 2. **Draw** a circle (in the structure given) around the group(s) of atoms you use for your calculations, and **give** their corresponding symbol(s) (α , β ...).

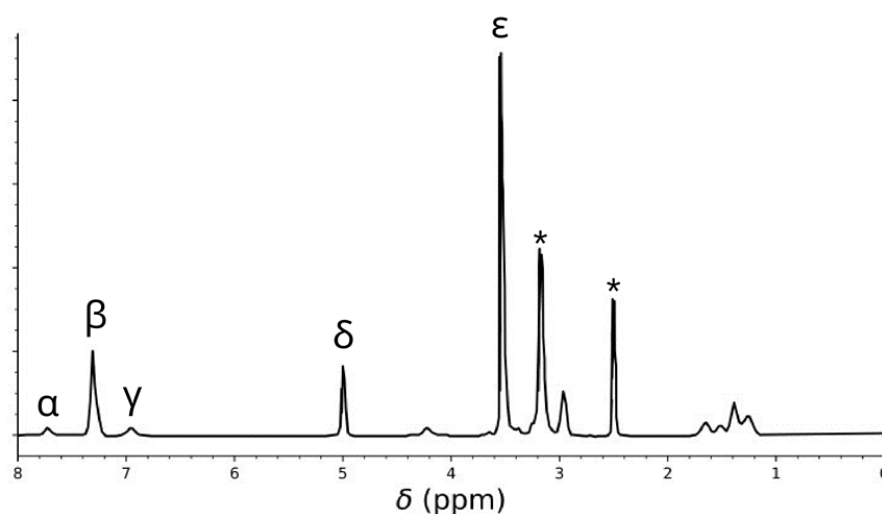
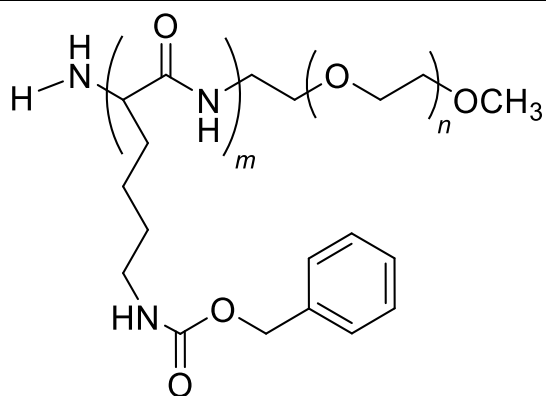


Table 2

| Peak | Area |
|------------|------|
| α | 22.4 |
| β | 119 |
| γ | 23.8 |
| δ | 47.6 |
| ϵ | 622 |

Fig. 1 – signals marked with * correspond to the solvent and water.



$M_n =$ kg mol⁻¹
Provide your answer with two decimal places.

This reaction of **1** with **2** yielded the copolymers **3a** after 20 h, **3b** after 25 h and **3c** after 30 h of reaction at 40 °C. Results of size-exclusion chromatography (SEC) experiments are presented in Fig. 2.

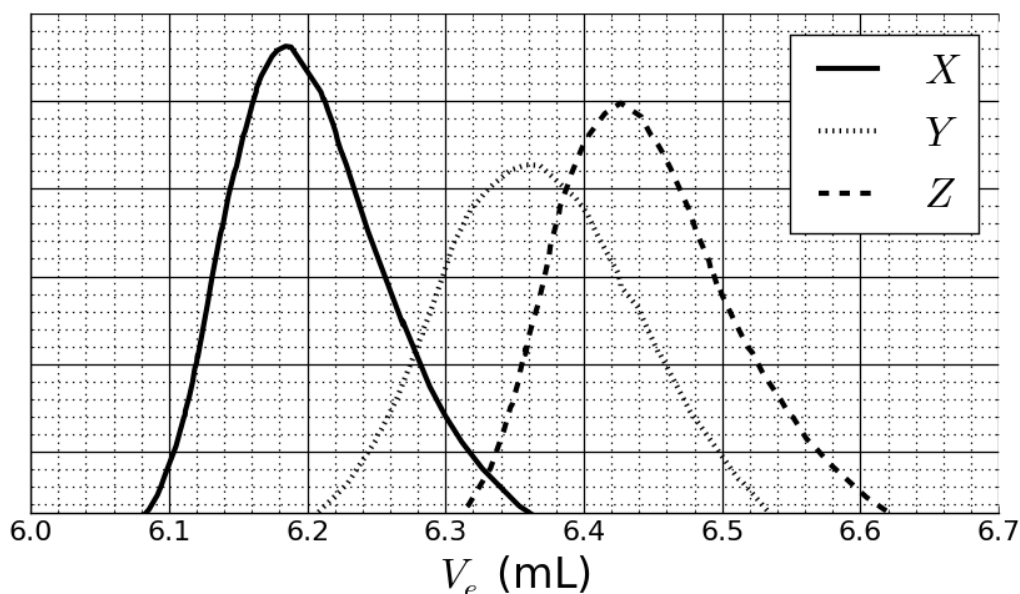


Fig. 2 – SEC chromatograms of **3a**, **3b** and **3c** as a function of the elution volume, V_e .

6. **Match** the signals in Fig. 2 with the copolymers **3a**, **3b** and **3c**.

| | | | |
|------------|----------------------------|----------------------------|----------------------------|
| 3a: | <input type="checkbox"/> X | <input type="checkbox"/> Y | <input type="checkbox"/> Z |
| 3b: | <input type="checkbox"/> X | <input type="checkbox"/> Y | <input type="checkbox"/> Z |
| 3c: | <input type="checkbox"/> X | <input type="checkbox"/> Y | <input type="checkbox"/> Z |

In order to calibrate the chromatogram, a mixture of standard polymers of known masses (3, 30, 130, 700 and 7000 kg mol⁻¹) has been studied (Fig. 3).

The log value of the molar mass is a linear function of the elution volume, V_e .

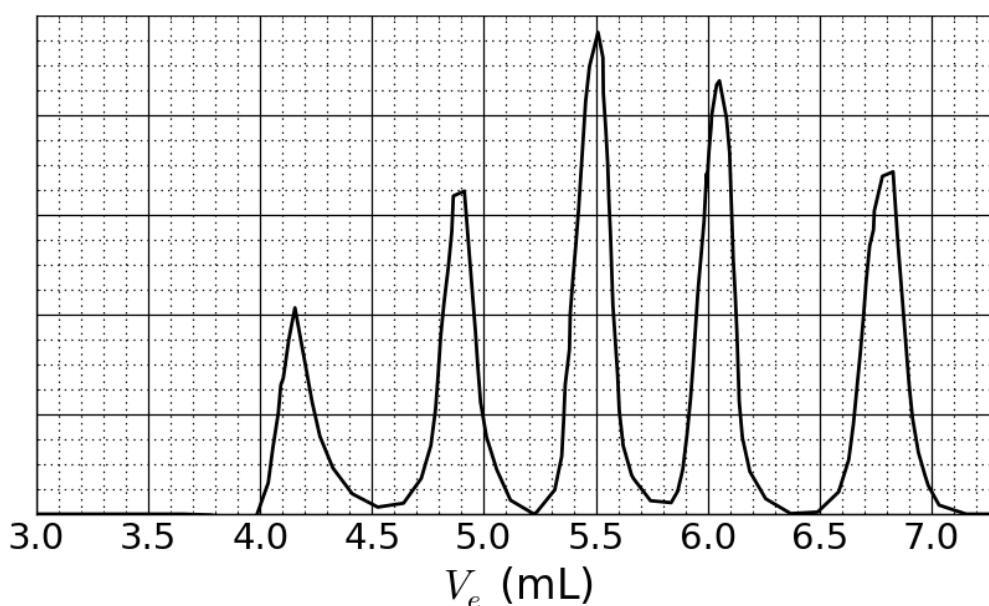
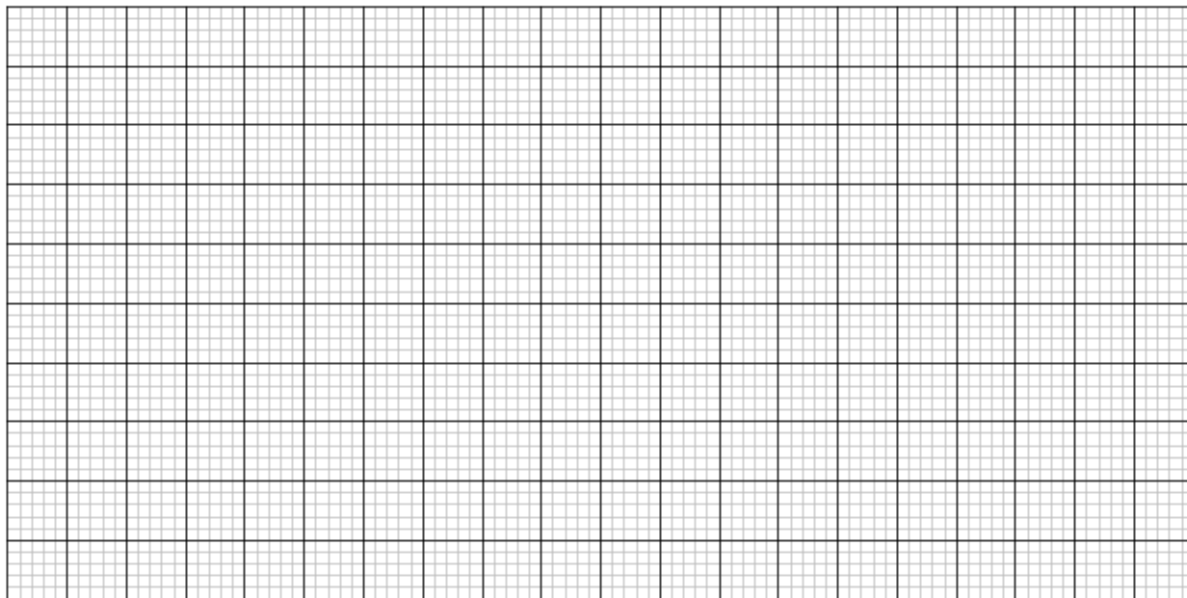


Fig. 3 – SEC chromatogram of the mixture of standards.

7. Based on the SEC curves in Fig. 2 and 3, **determine** V_e of the polymer that corresponds to curve X and use it to **estimate** the degree of polymerization m of its second block. **Detail** your calculation; you may use a calculator or plot a graph.

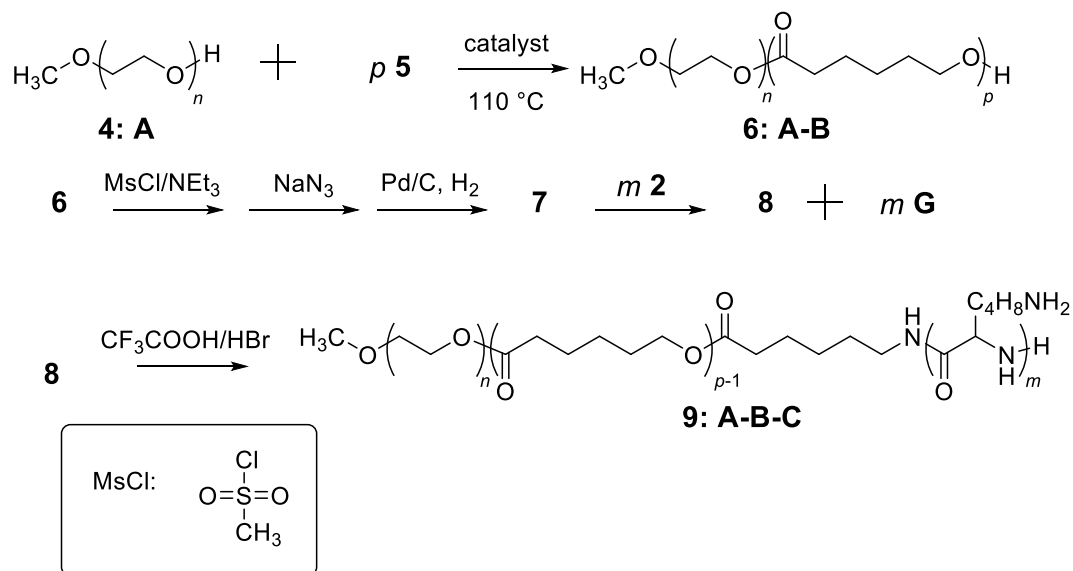
 $V_e =$

mL

 $m =$

Triblock copolymer synthesis

For biological applications, involving the formation of micelles, a triblock copolymer **9** can be synthesized through the introduction of a middle block, **B**, using p numbers of monomer **5**.



8. **Draw** the structures of **5**, **7** and **8**.


5 (no other products than **6:A-B** are obtained)


7 (a gas is formed in the final step)


8

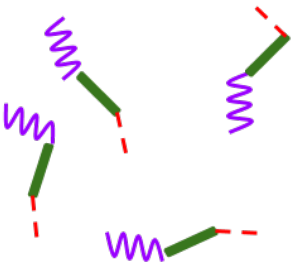
9. Amphiphilic block copolymers, such as **9: A-B-C**, can be used for medical applications, as they self-assemble into micelles in water (pH = 7), which can be used as drug carriers. Assign each block of the copolymer to a property. Draw a scheme of the micelle with only 4 polymer chains.

| | | |
|----|--------------------------------------|--------------------------------------|
| A: | <input type="checkbox"/> hydrophobic | <input type="checkbox"/> hydrophilic |
| B: | <input type="checkbox"/> hydrophobic | <input type="checkbox"/> hydrophilic |
| C: | <input type="checkbox"/> hydrophobic | <input type="checkbox"/> hydrophilic |

A 

B 

C 


⇌

Problem T7: Ring motion in a [2]catenane

| Problem | Question | 1 | 2 | 3 | 4 | 5 | 6 | 7 | 8 | 9 | 10 | 11 | Total |
|---------|----------|---|----|---|---|---|---|---|---|---|----|----|-------|
| T7 | Points | 4 | 12 | 2 | 2 | 2 | 5 | 5 | 8 | 4 | 5 | 5 | 54 |
| 6% | Score | | | | | | | | | | | | |

In 2016, the Nobel Prize in Chemistry was awarded to J.-P. Sauvage, Sir J. F. Stoddart and B. L. Feringa "for the design and synthesis of molecular machines". An example of these is [2]catenane, a molecule consisting of two interlocked rings. In this system, one macrocycle contains a single phenanthroline (bidentate) ligand and the second contains two ligands: a phenanthroline and a terpyridine (tridentate) ligand. A copper ion is coordinated by one ligand from each macrocycle. Depending on the oxidation state of the copper (+I or +II), two configurations are obtained (Fig. 1).

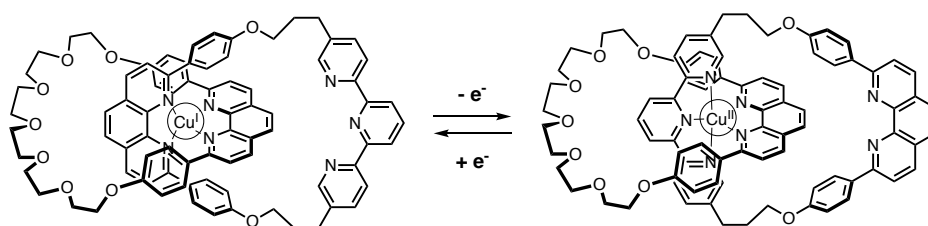
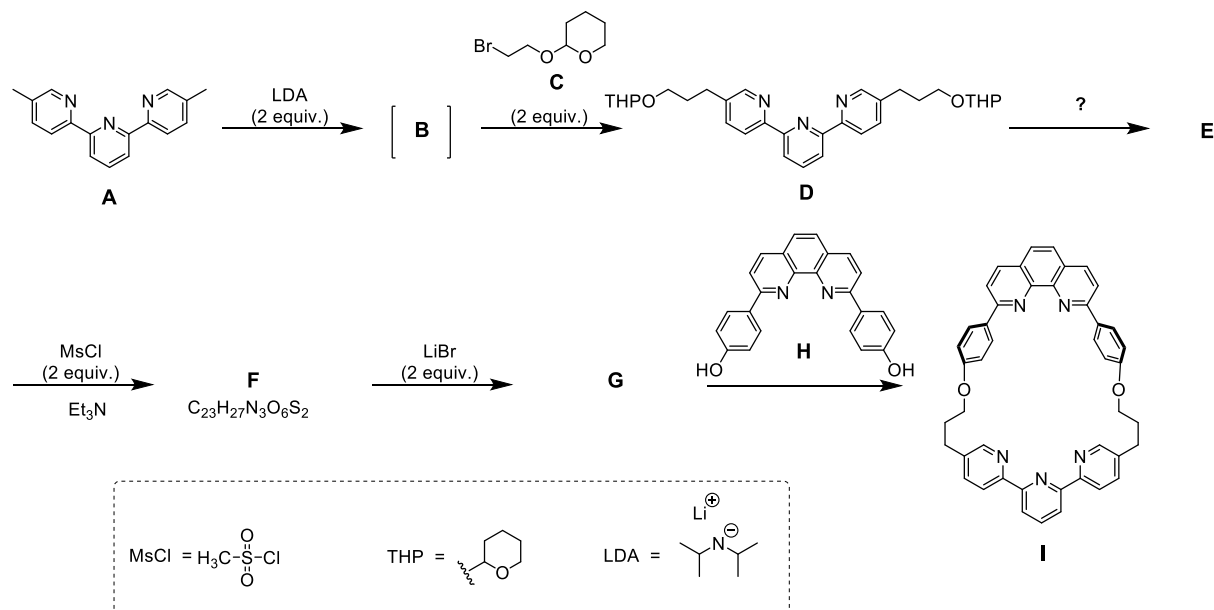


Fig. 1 – Multi-stability of a ring in a [2]catenane.

The synthesis of the macrocycle is the following:



1. **Draw** the structure of **B**.

B

2. **Draw** the structures of **E**, **F** and **G**.

E

F

G

3. Out of the following the reaction conditions, **choose** which one(s) can produce **E** from **D**:

- ☐ H^+ , H_2O
- ☐ OH^- , H_2O
- ☐ NaBH_4 , CH_3OH
- ☐ H_2 , Pd/C , THF

4. In the synthetic strategy, MsCl is used to obtain:

- ☐ a leaving group
- ☐ a protecting group
- ☐ a deactivating group
- ☐ a directing group

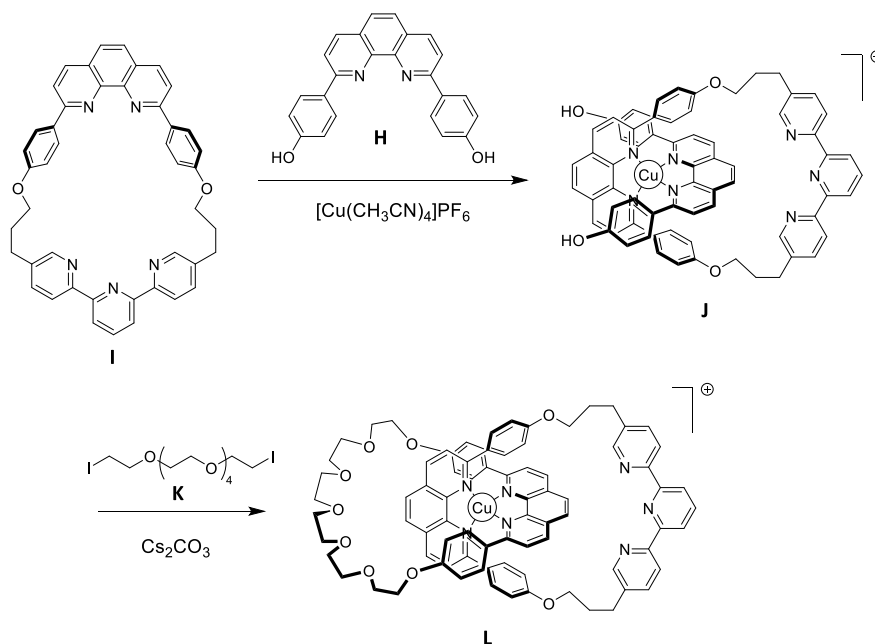
5. **G** is obtained by the reaction between **F** and LiBr in acetone. This reaction is:

- ☐ electrophilic aromatic substitution
- ☐ nucleophilic aromatic substitution
- ☐ $\text{S}_{\text{N}}1$
- ☐ $\text{S}_{\text{N}}2$

6. **Draw** the transition state of the rate-determining step of the reaction **F** \rightarrow **G**, showing the 3D geometry. Depict only one reaction center. The main carbon chain can be represented as an R group.

Transition state:

The synthesis of [2]catenane **L** uses the template effect of a copper complex:



7. **Write** the full electronic configuration of Cu(0) in its ground state. Give the oxidation state of Cu in complex **J** and write the electronic configuration of Cu in the free ion (uncomplexed form) corresponding to **J**.

Electronic configuration of Cu(0):

Oxidation state of Cu in **J**:

Electronic configuration of Cu in **J**:

8. **Select** the geometry of the copper ion in **L**. Assuming an ideal geometry of the ligands around the copper center, **draw** the electronic levels of the d-orbitals subject to the crystal field. **Fill** the orbital diagram. **Give** the maximum value of the spin (S) for this complex.

The geometry of Cu in **L** is:

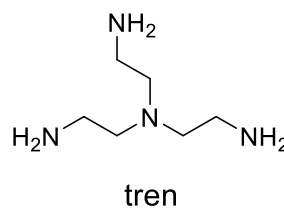
- ☐ Octahedral
☐ Tetrahedral
☐ Square planar
☐ Trigonal bipyramid

Splitting and filling of d orbitals:

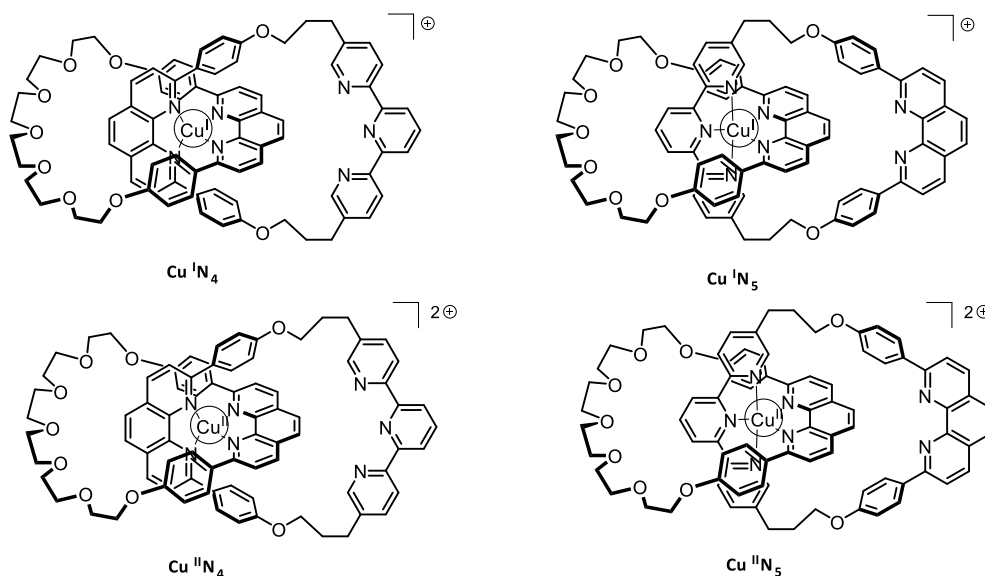
$S =$

9. Out of the following compounds, **choose** the one(s) that can remove the copper ion in **L** to obtain the free [2]catenane:

- ☐ CH_3CN
☐ NH_4PF_6
☐ KCN
☐ tren



In [2]catenane **L**, the copper ion can exist in two oxidation states (+I) or (+II), and each of them exhibits a different coordination sphere (tetra- or penta-coordinated, respectively).

Fig. 2 – [2]catenane **L** states

The stability of Cu(I) complexes can be inferred by comparing their electronic structures to that of a noble gas.

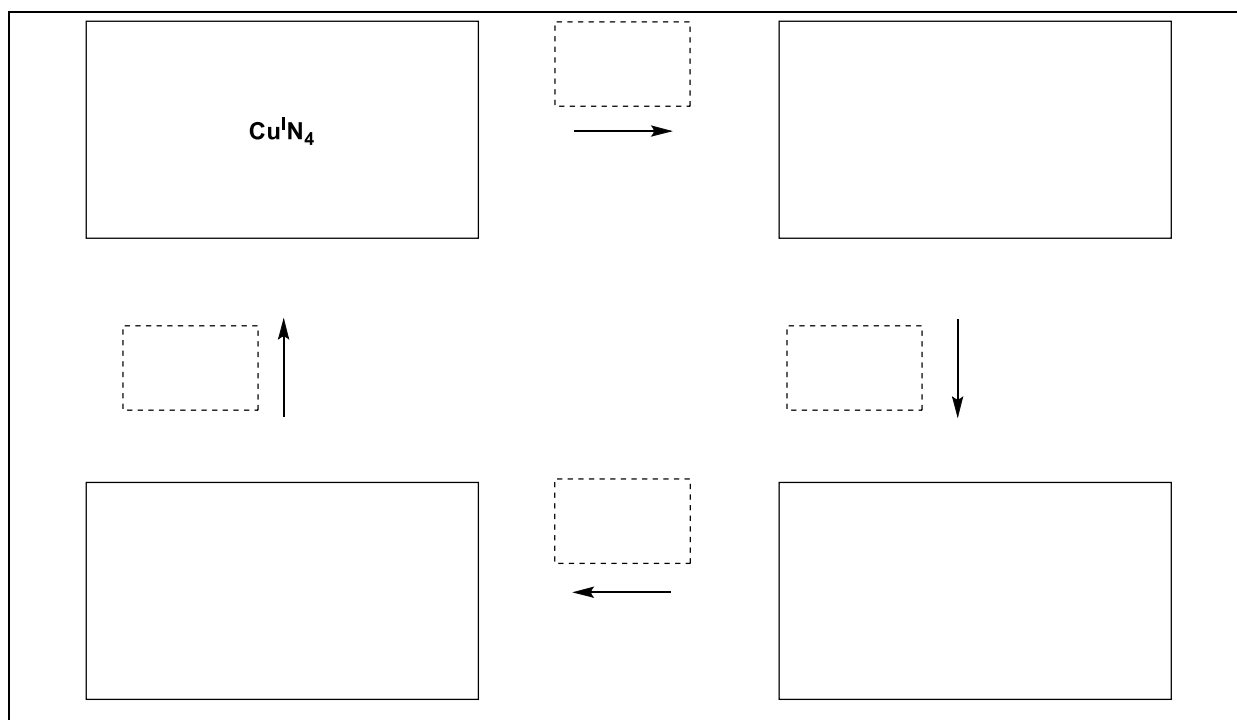
10. **Fill** in the blanks with a number or a tick:

The $\text{Cu}^{\text{I}}\text{N}_4$ complex has ... electrons in the coordination sphere of the metal.

The $\text{Cu}^{\text{I}}\text{N}_5$ complex has ... electrons in the coordination sphere of the metal.

The $\text{Cu}^{\text{I}}\text{N}_4$ complex is ☐ more / ☐ less stable than the $\text{Cu}^{\text{I}}\text{N}_5$ complex.

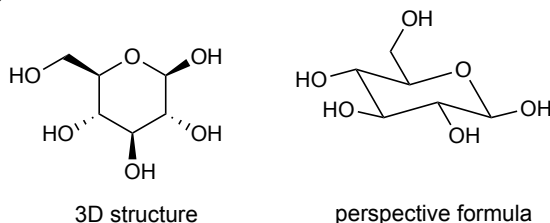
11. **Fill** in the solid boxes with the designation of the involved complexes in Fig. 2 and **complete** the sequence to achieve electrochemical control of the system using the following notation for the dashed boxes: (rotation); $+e^-$; $-e^-$.



| Problem | Question | 1 | 2 | 3 | 4 | 5 | 6 | 7 | 8 | 9 | 10 | 11 | 12 | 13 | 14 | 15 | Total |
|----------|----------|---|---|---|---|----|---|---|---|---|----|----|----|----|----|----|-------|
| T8 6% | Points | 2 | 6 | 2 | 2 | 11 | 2 | 4 | 3 | 4 | 2 | 6 | 8 | 2 | 6 | 4 | 64 |
| | Score | | | | | | | | | | | | | | | | |

Problem T8: Identification and synthesis of inositols

In this problem, we define “3D structure” and “perspective formula” as indicated for β -glucose in the following figure.



Inositols are cyclohexane-1,2,3,4,5,6-hexols. Some of these 6-membered carbocycles, in particular *myo*-inositol, are involved in a number of biological processes.

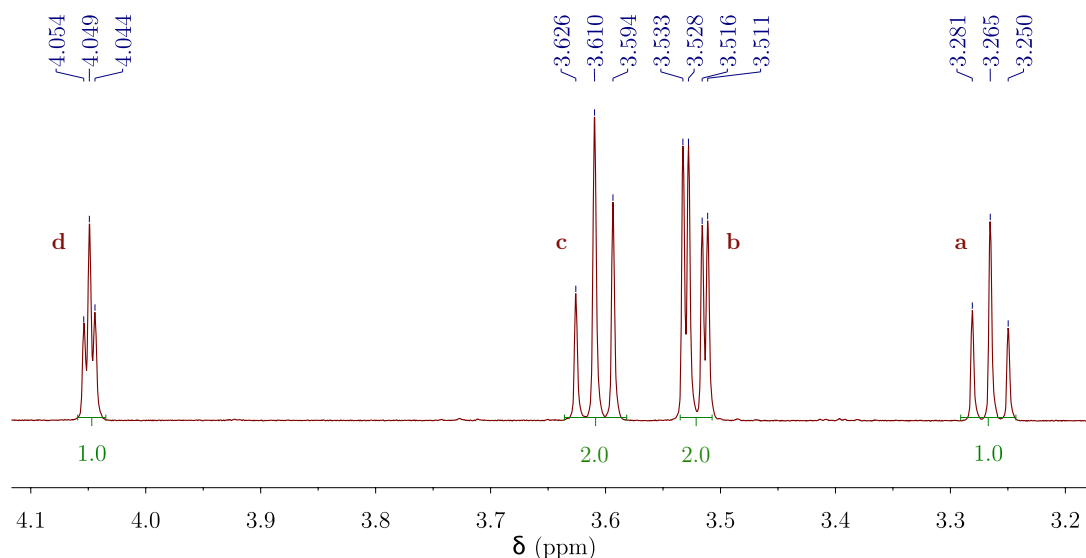
Structure of *myo*-inositol

1. **Draw** the structural formula of inositols without stereochemical details.

This family of molecules contains 9 different stereoisomers, including enantiomers.

2. **Draw** 3D structures of all the stereoisomers that are optically active.

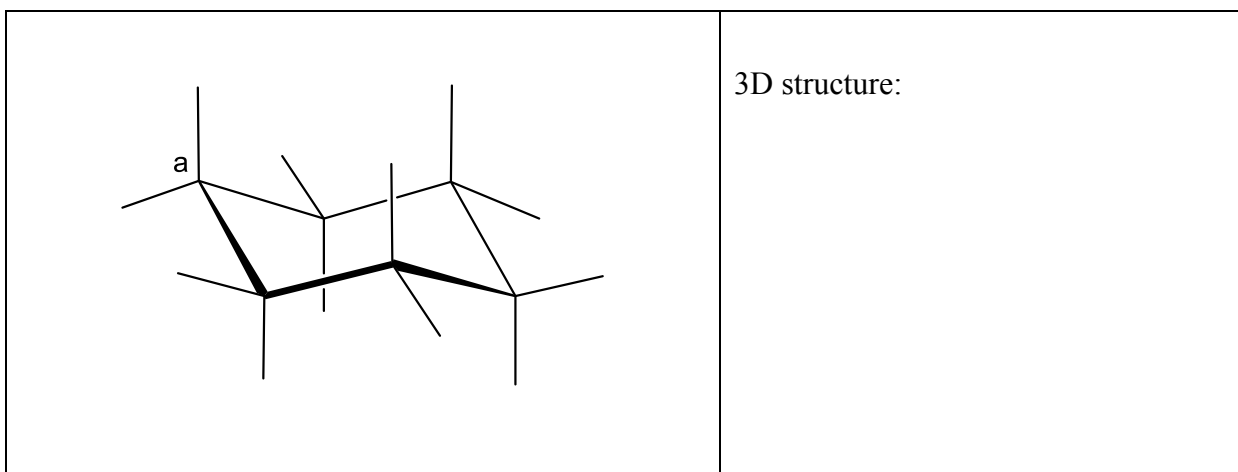
The structure of a specific inositol, called *myo*-inositol, is studied here. Only one of its chair conformers is predominant and its structure can be deduced from its ^1H NMR spectrum. The spectrum below was obtained at 600 MHz in D_2O . No other signal from that compound was observed in the spectrum. The integration is indicated on the spectrum below each signal.



3. **Give** the molecular formula of the predominant compound derived from *myo*-inositol in this sample that is consistent with the number of protons observed in the ^1H NMR spectrum.

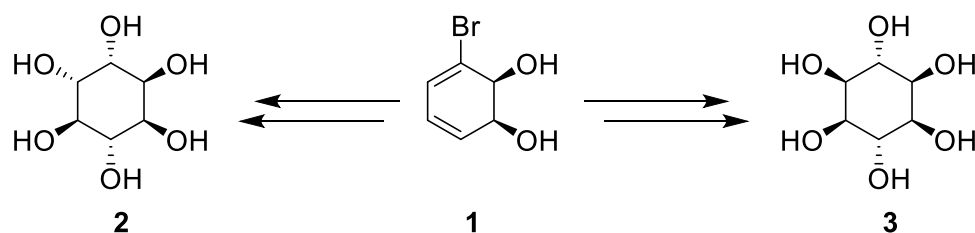
4. Based on the number and integrations of the proton signals, **give** the number of symmetry plane(s) that exist(s) in this molecule.

5. **Complete** the following perspective drawing of the most stable conformation of *myo*-inositol. Then **label** each hydrogen with the corresponding letter (**a**, **b**, **c** or **d**) according to the ^1H NMR spectrum above. Proton **a** must be on carbon **a** in the following representation. **Draw** its 3D structure.



Synthesis of inositols

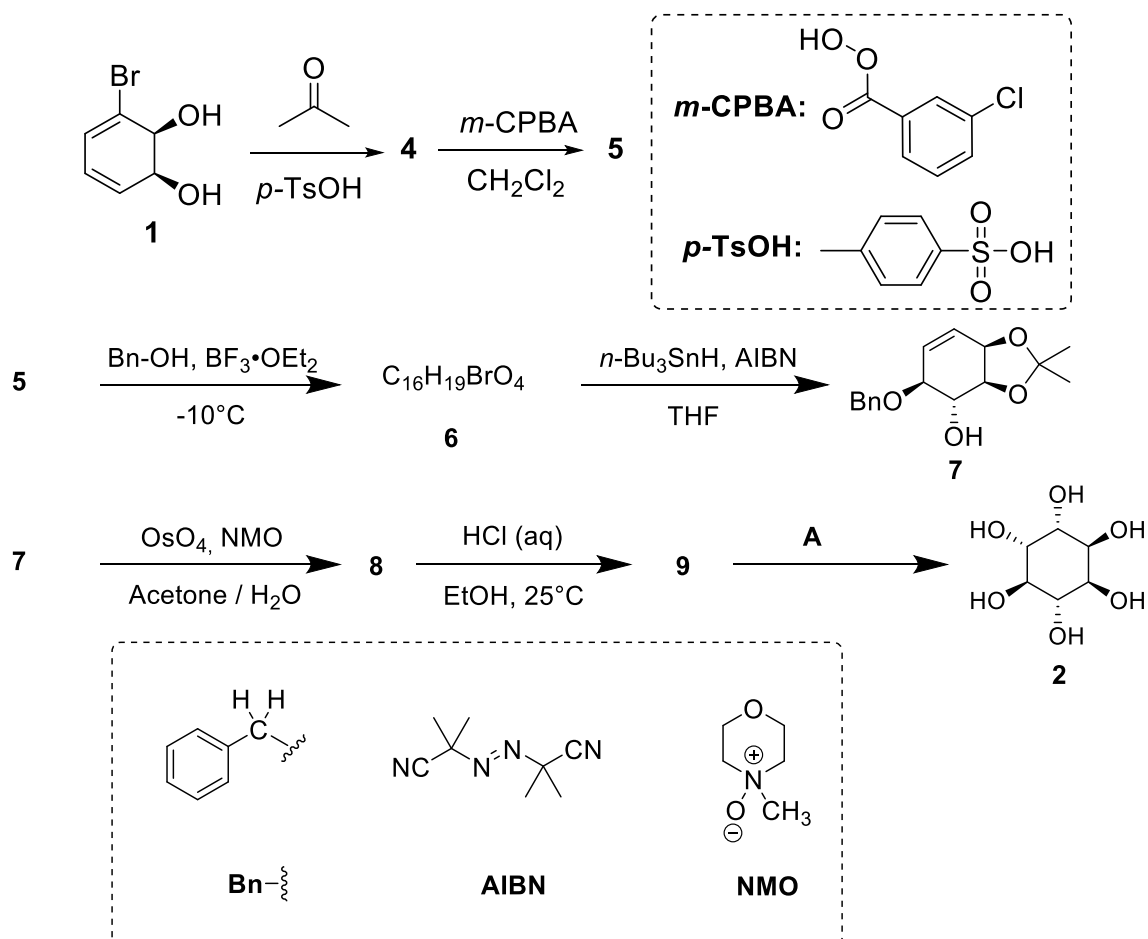
For medicinal applications, it is useful to synthesize some inositol phosphates on a large scale. We will study the synthesis of inositol **2** from bromodiol **1**.



6. **Choose** the correct structural relationship(s) between **2** and **3**.

- ☐ enantiomers
☐ epimers
☐ diastereomers
☐ atropoisomers

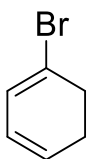
Inositol **2** can be obtained from compound **1** in 7 steps.



7. **Draw** the 3D structure of **4**.

4

8. The reaction leading to **5** occurs on the double bond with the highest electron density. Consider below the structure of 1-bromo-1,3-cyclohexadiene, which is a substructure of **4**. **Circle** the double bond having the highest electron density. On separate structures, **represent** all the electronic effects due to the bromine.



9. **Draw** the 3D structure of the major diastereomer **5**.

5

10. **Give** the total number of stereoisomers of **5** possibly obtained by this synthesis, starting from enantiopure compound **1**.

11. For the step **5** \rightarrow **6**, another product, denoted **6'**, with the same molecular formula as **6** can be produced. **Draw** the 3D structures of **6** and **6'**.

6

6'

12. **Draw** the 3D structures of the major diastereomers **8** and **9**.

| | |
|----------|----------|
| 8 | 9 |
|----------|----------|

13. **Select** the right set(s) of conditions **A** to obtain **2**.

- ☐ H₂, Pd/C
☐ K₂CO₃, HF
☐ HCOOH, H₂O
☐ BF₃·OEt₂

14. If the bromine is not present in compound **1**, in addition to **2**, another stereoisomer would be obtained. Considering that the stereoselectivity of the reactions in the above synthesis remains unchanged and that the steps involve the same number of equivalents as for **2**, **draw** the 3D structure of this stereoisomer and **give** its relationship with **2**.

- ☐ enantiomers
☐ epimers
☐ diastereoisomers
☐ atropoisomers

15. During the synthesis of **2** from **1**, **choose** the removal step(s) of protecting and/or directing groups.

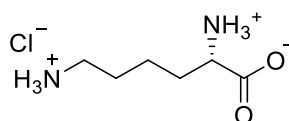
- ☐ **1** → **4**
☐ **4** → **5**
☐ **5** → **6**
☐ **6** → **7**
☐ **7** → **8**
☐ **8** → **9**
☐ **9** → **2**

| Problem | Question | 1 | 2 | 3 | 4 | 5 | 6 | 7 | 8 | 9 | 10 | 11 | 12 | 13 | Total |
|----------|----------|---|---|---|---|---|----|---|---|---|----|----|----|----|-------|
| T9 7% | Points | 2 | 2 | 4 | 3 | 2 | 17 | 1 | 1 | 2 | 4 | 2 | 2 | 2 | 44 |
| | Score | | | | | | | | | | | | | | |

Problem T9: Synthesis of levobupivacaine

Part I.

The local anesthetic bupivacaine (marketed as Marcaine) is on the World Health Organization List of Essential Medicines. Although the drug is currently used as a racemic mixture, it was demonstrated that one enantiomer of bupivacaine, levobupivacaine, is less cardiotoxic and, therefore, safer than the racemate. Levobupivacaine can be synthesized from the natural amino acid L-lysine.



L-Lysine hydrochloride

1. **Assign** the absolute configuration of the stereogenic center in L-lysine hydrochloride and **justify** your answer by classifying the substituents in order of their priority.

| | |
|----------------------------------------------------------|-------------------------|
| Configuration: | Priority 1 > 2 > 3 > 4: |
| <input type="checkbox"/> R <input type="checkbox"/> S | |

2. The prefix L in L-lysine refers to relative configuration. **Choose** all correct statements:

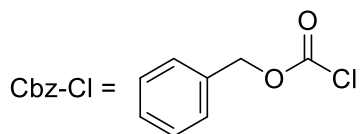
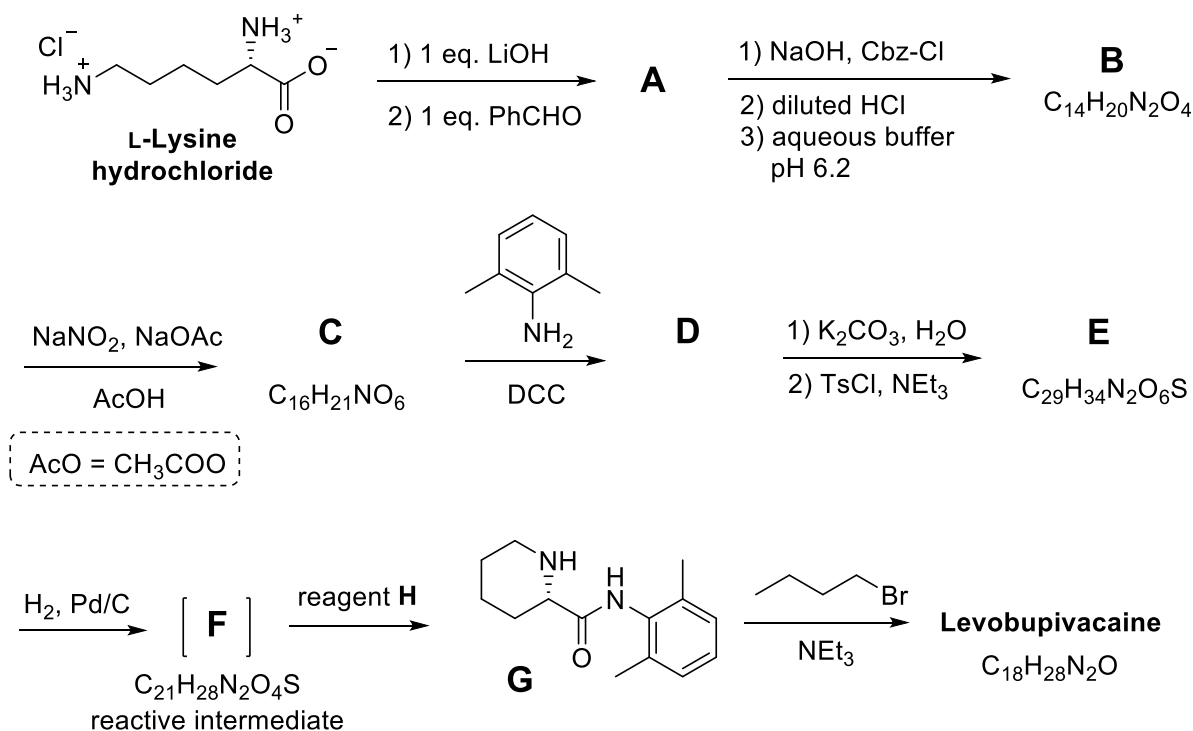
- | |
|---------------------------------------------------------------------------------------------------------------------------------------------------------------------------------------------------------------------------------------------------------------------------------------------|
| <input type="checkbox"/> All natural L-amino acids are levorotatory. <input type="checkbox"/> Natural L-amino acids can be levorotatory or dextrorotatory. <input type="checkbox"/> All natural L-amino acids are (S). <input type="checkbox"/> All natural L-amino acids are (R). |
|---------------------------------------------------------------------------------------------------------------------------------------------------------------------------------------------------------------------------------------------------------------------------------------------|

Often, we want only one of the amino groups in L-lysine to react. A Cu^{2+} salt with excess aqueous hydroxide can selectively mask the reactivity of one of the amino groups. After the complex is formed, only the non-complexed NH_2 group is available to react.

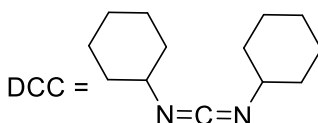
3. Considering that L-lysine acts as a bidentate ligand and that two molecules of L-lysine coordinate to one Cu^{2+} ion in the presence of aqueous hydroxide, **draw** the structure of the intermediate complex.

Complex

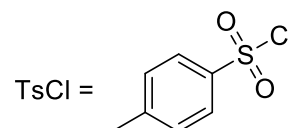
Fortunately, in the synthesis of levobupivacaine shown below, the same amino group reacts even without Cu^{2+} salt.



(benzyloxycarbonyl chloride)



(*N,N'*-dicyclohexylcarbodiimide)



(*p*-toluenesulfonyl chloride)

From this point on, you can use the abbreviations proposed in the scheme above.

4. **Draw** the structure of compound **A**, including the appropriate stereochemistry.

A

5. Transformation of L-lysine hydrochloride into **A** is (**choose** proper answer(s)):

- ☐ an enantioselective reaction.
☐ an enantiospecific reaction.
☐ a regioselective reaction.

6. **Draw** the structures of compounds **B–F**, including the appropriate stereochemistry.

| | |
|--------------------------------|--------------------------------|
| B $C_{14}H_{20}N_2O_4$ | C $C_{16}H_{21}NO_6$ |
| D | E $C_{29}H_{34}N_2O_6S$ |
| F $C_{21}H_{28}N_2O_4S$ | |

7. What is the role of DCC in the transformation $C \rightarrow D$?

- ☐ Protecting group for the amino group.
- ☐ Protecting group for the hydroxy group.
- ☐ Activating agent for the amide bond formation.

8. TsCl is used in the synthesis to enable:

- ☐ Nucleophilic substitution of an amino group.
- ☐ Electrophilic substitution of an amino group.
- ☐ Nucleophilic substitution of a hydroxy group.
- ☐ Electrophilic substitution of a hydroxy group.

9. **Mark** all possible reagents which could be used as reagent **H**:

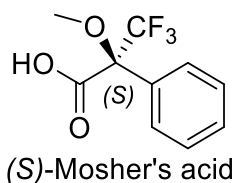
- | | |
|---------------------------------------------------------|---------------------------------------------------------|
| <input type="checkbox"/> dilute HCl | <input type="checkbox"/> Zn/HCl |
| <input type="checkbox"/> K ₂ CO ₃ | <input type="checkbox"/> H ₂ SO ₄ |
| <input type="checkbox"/> dilute KMnO ₄ | <input type="checkbox"/> dilute NaOH |
| <input type="checkbox"/> SOCl ₂ | <input type="checkbox"/> PCl ₅ |

10. **Draw** the structure of levobupivacaine, including the appropriate stereochemistry.

Levobupivacaine C₁₈H₂₈N₂O

Part II.

The synthesis of levobupivacaine requires the use of enantiomerically pure L-lysine. A common method to confirm the enantiomeric purity of aminoacids is their transformation into amides using Mosher's acid (see the structure of the (*S*) isomer below).



11. **Draw** the structure of the amide formed when the α -amino group of L-lysine is derivatized with (*S*)-Mosher's acid. Clearly show the stereochemistry of each chiral center.

12. **How many products** will be formed from racemic lysine and (*S*)-Mosher's acid (consider that only the α -amino group of lysine is derivatized)?

- | |
|------------------------------------------------------------------------------------|
| <input type="checkbox"/> Two diastereoisomers. |
| <input type="checkbox"/> Four diastereoisomers. |
| <input type="checkbox"/> A racemic mixture of two enantiomers. |
| <input type="checkbox"/> Four compounds: two enantiomers and two diastereoisomers. |

13. **Choose** the method(s) which can be used to quantitatively determine the enantiomeric purity of lysine after its derivatization with (*S*)-Mosher's acid:

- | |
|-------------------------------------------------|
| <input type="checkbox"/> NMR spectroscopy. |
| <input type="checkbox"/> Liquid chromatography. |
| <input type="checkbox"/> Mass spectrometry. |
| <input type="checkbox"/> UV-vis spectroscopy. |